


Velika logična pošast



Položaj na zemljevidu

Na zemljevidu sta točki A in B.
V naravi smo odčitali azimuta α in β proti A oziroma B iz točke C.
Nariši točko C na zemljevidu.
Azimut točke A iz točke C je kot, ki ga oklepa žarek proti točki A iz točke C s smerjo iz C proti severnemu tečaju.

1.

$$\alpha = 68^\circ$$
$$\beta = 35^\circ$$

A



B



2.

$$\alpha = 60^\circ$$
$$\beta = 43^\circ$$

A



B



3.

$$\alpha = 50^\circ$$
$$\beta = 36^\circ$$

A



B



4.

$$\alpha = 31^\circ$$
$$\beta = 64^\circ$$

A



B



5.

$$\alpha = 64^\circ$$
$$\beta = 43^\circ$$

A



B



6.

$$\alpha = 62^\circ$$
$$\beta = 59^\circ$$

A



B



7.

$$\alpha = 35^\circ$$
$$\beta = 32^\circ$$

A



B



8.

$$\alpha = 66^\circ$$
$$\beta = 70^\circ$$

A



B



9.

$$\alpha = 62^\circ$$
$$\beta = 54^\circ$$

A



B



10.

$$\alpha = 38^\circ$$
$$\beta = 48^\circ$$

A



B



11.

$$\alpha = 54^\circ$$
$$\beta = 35^\circ$$



12.

$$\alpha = 48^\circ$$
$$\beta = 46^\circ$$



13.

$$\alpha = 53^\circ$$
$$\beta = 60^\circ$$

A



B



14.

$$\alpha = 70^\circ$$
$$\beta = 55^\circ$$

A



B



15.

$$\alpha = 34^\circ$$
$$\beta = 60^\circ$$

A



B



16.

$$\alpha = 51^\circ$$
$$\beta = 57^\circ$$

A



B



17.

$$\alpha = 62^\circ$$
$$\beta = 35^\circ$$

A



B



18.

$$\alpha = 58^\circ$$
$$\beta = 39^\circ$$

A



B



19.

$$\alpha = 66^\circ$$
$$\beta = 54^\circ$$

A



B



20.

$$\alpha = 37^\circ$$
$$\beta = 40^\circ$$

A



B



21.

$$\alpha = 70^\circ$$
$$\beta = 38^\circ$$

A



B



22.

$$\alpha = 54^\circ$$
$$\beta = 62^\circ$$

A



B



23.

$$\alpha = 59^\circ$$
$$\beta = 38^\circ$$

A



B



24.

$$\alpha = 66^\circ$$
$$\beta = 56^\circ$$

A



B



25.

$$\alpha = 62^\circ$$
$$\beta = 40^\circ$$

A



B



26.

$$\alpha = 52^\circ$$
$$\beta = 48^\circ$$

A



B



27.

$$\alpha = 66^\circ$$
$$\beta = 51^\circ$$

A



B



28.

$$\alpha = 52^\circ$$
$$\beta = 57^\circ$$

A



B



29.

$$\alpha = 61^\circ$$
$$\beta = 67^\circ$$

A



B



30.

$$\alpha = 33^\circ$$
$$\beta = 36^\circ$$

A

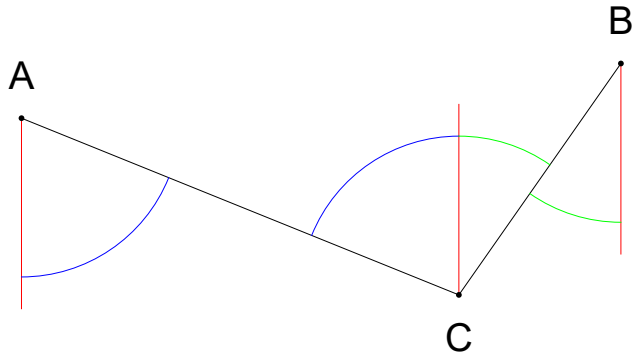


B

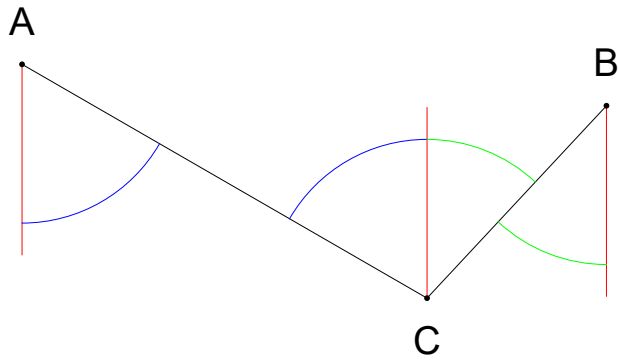


Rešitve:

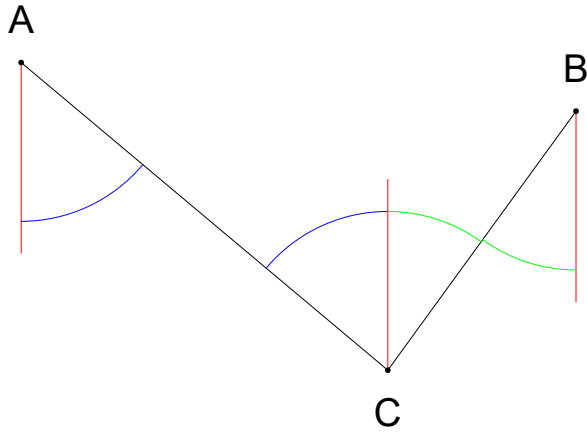
1.



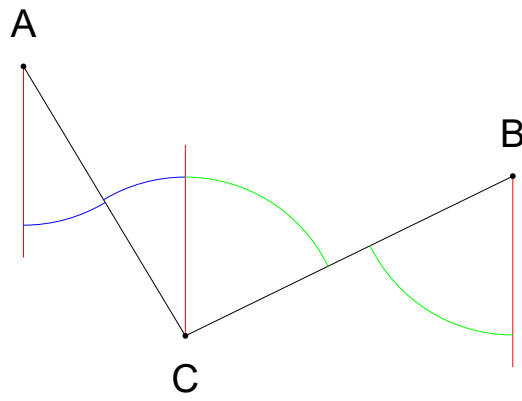
2.



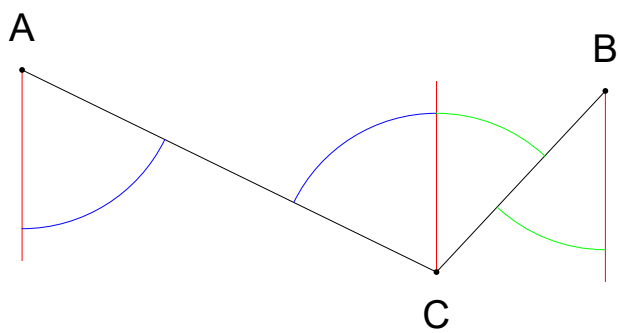
3.



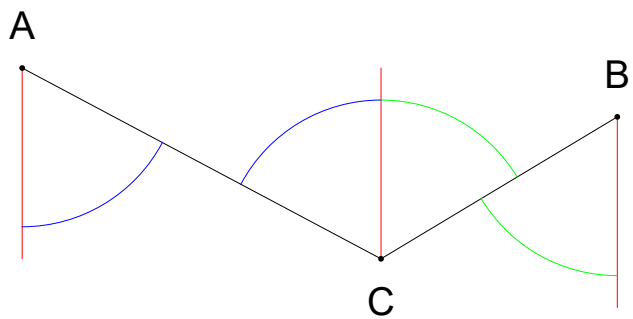
4.



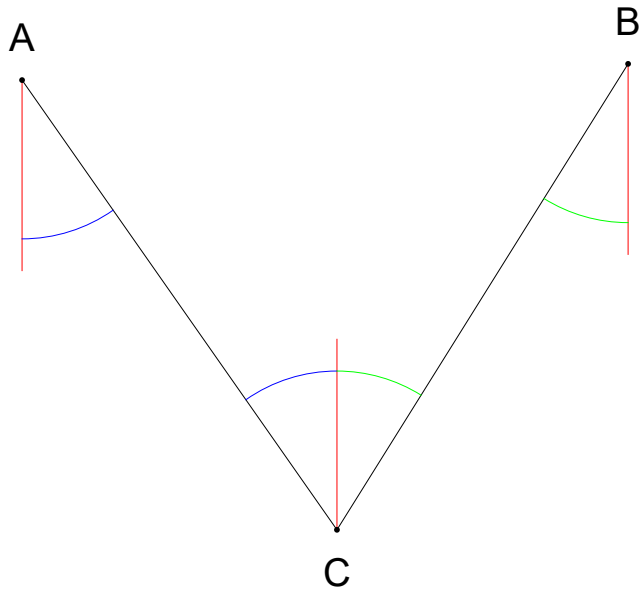
5.



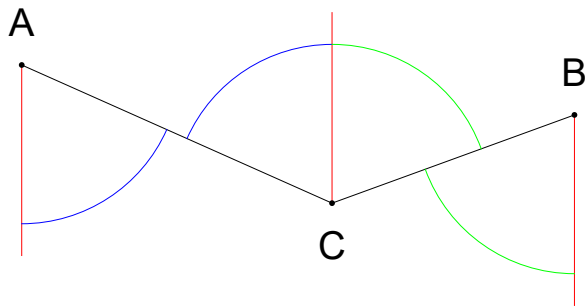
6.



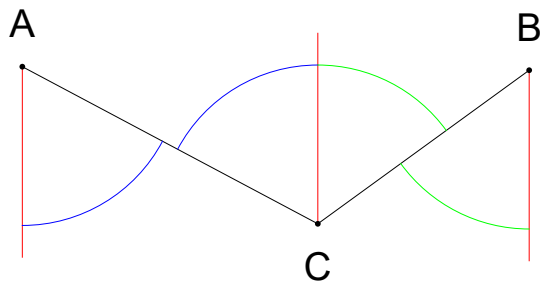
7.



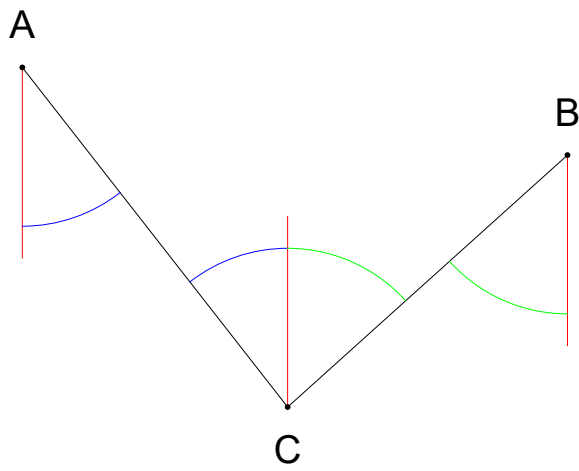
8.



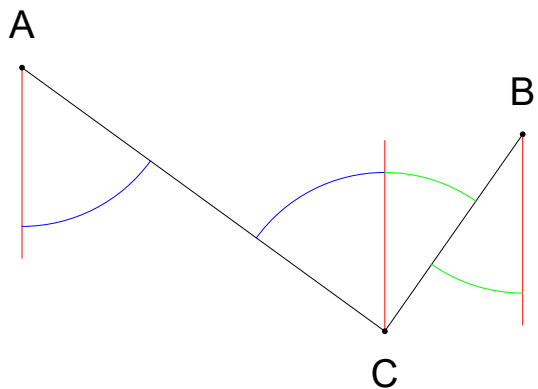
9.



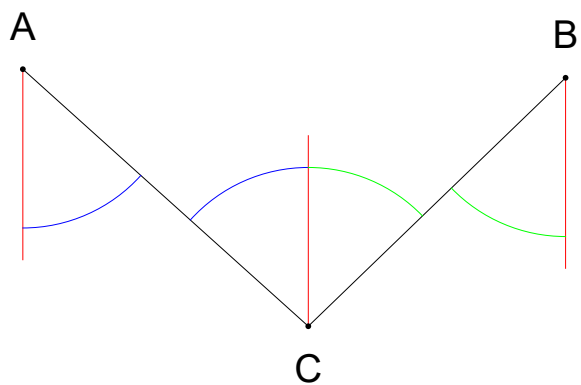
10.



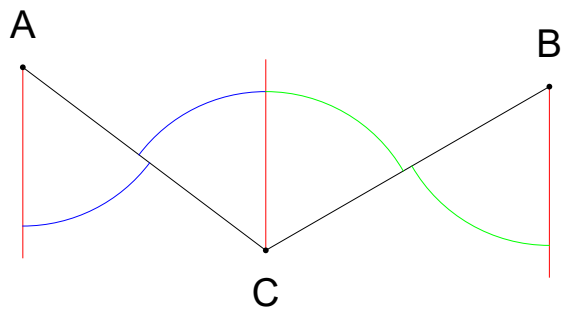
11.



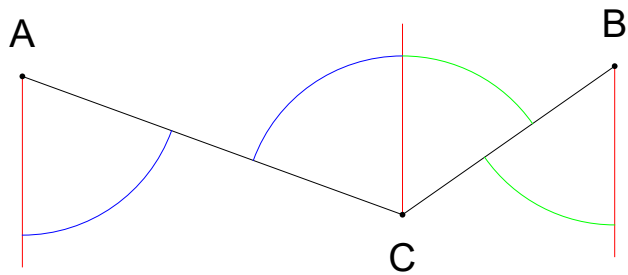
12.



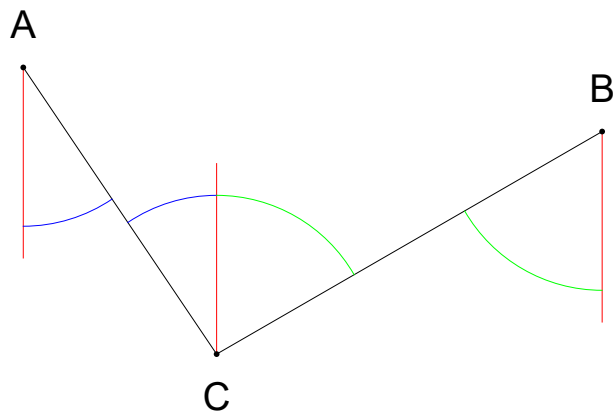
13.



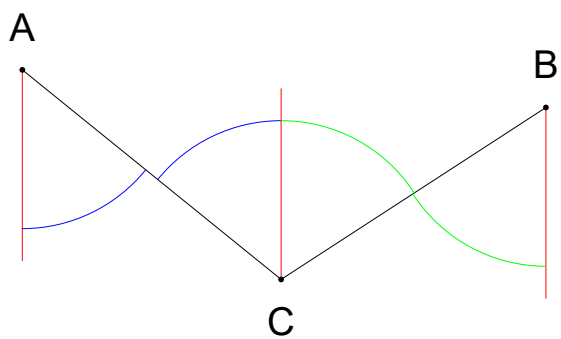
14.



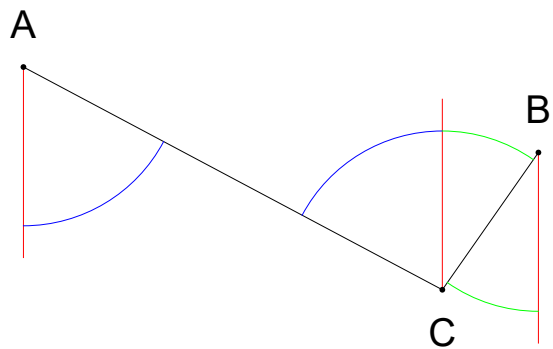
15.



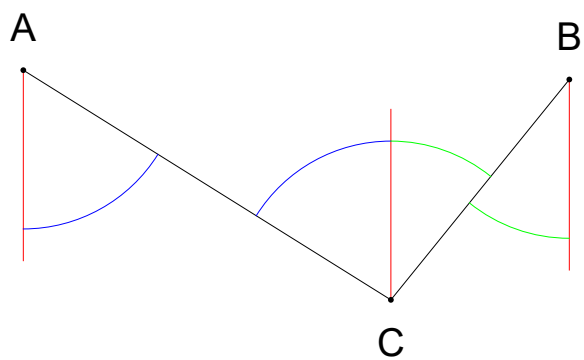
16.



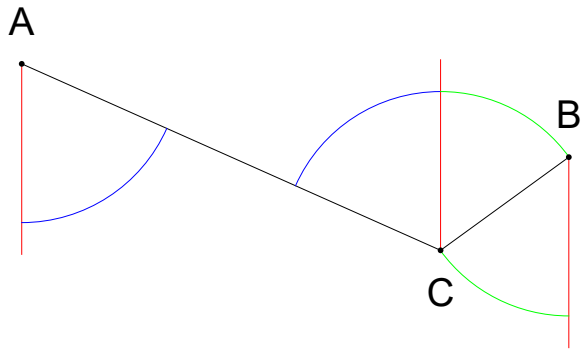
17.



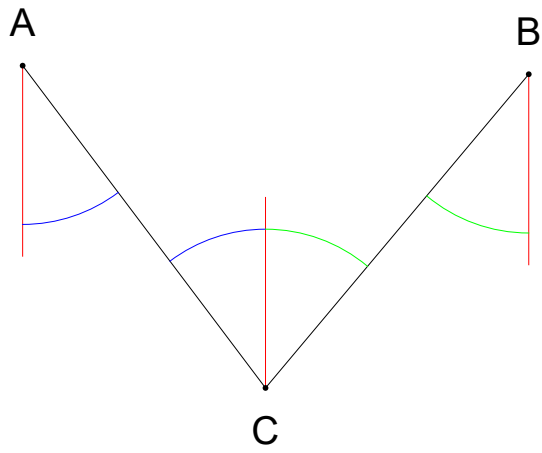
18.



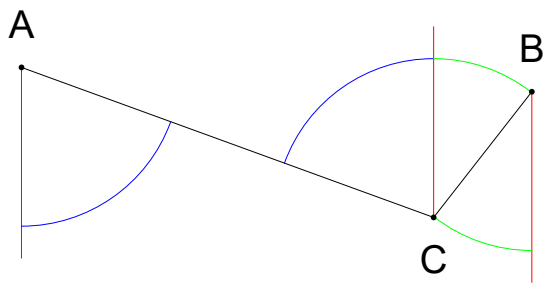
19.



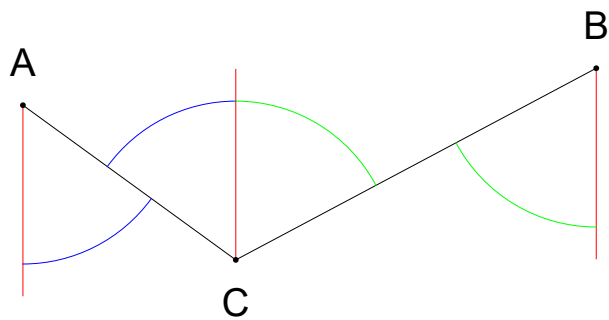
20.



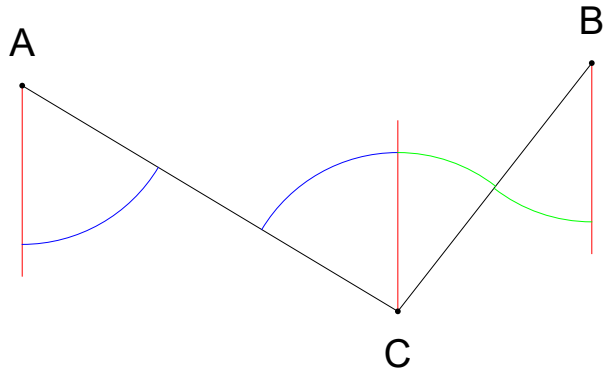
21.



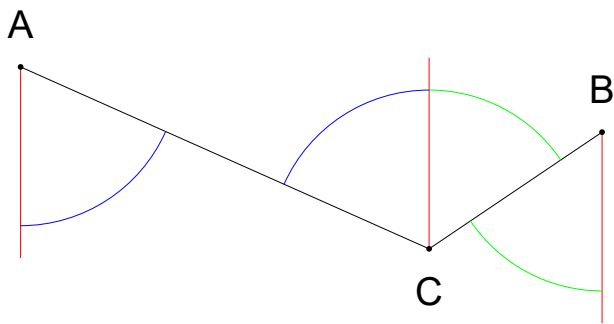
22.



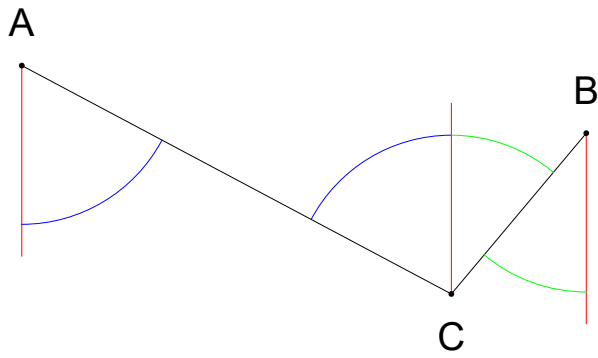
23.



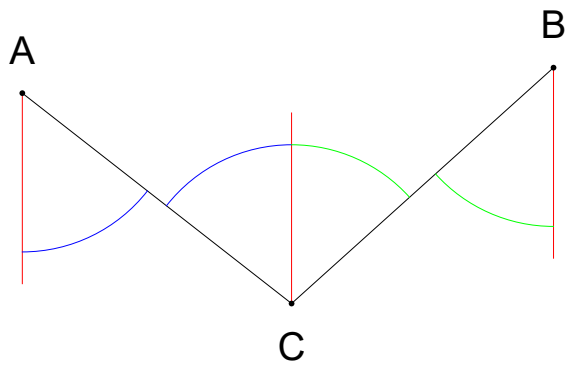
24.



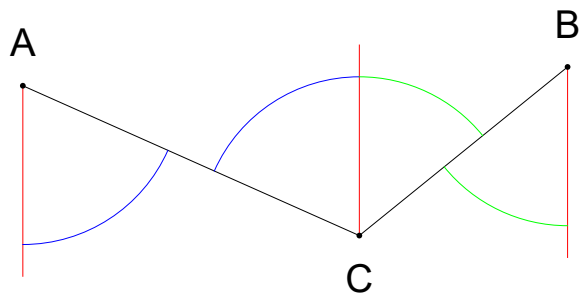
25.



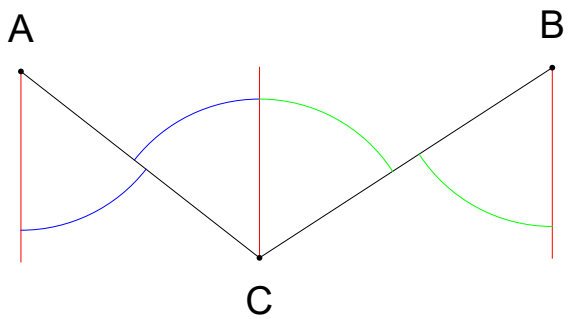
26.



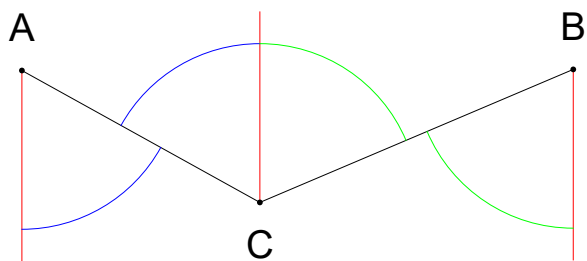
27.



28.



29.



30.

