


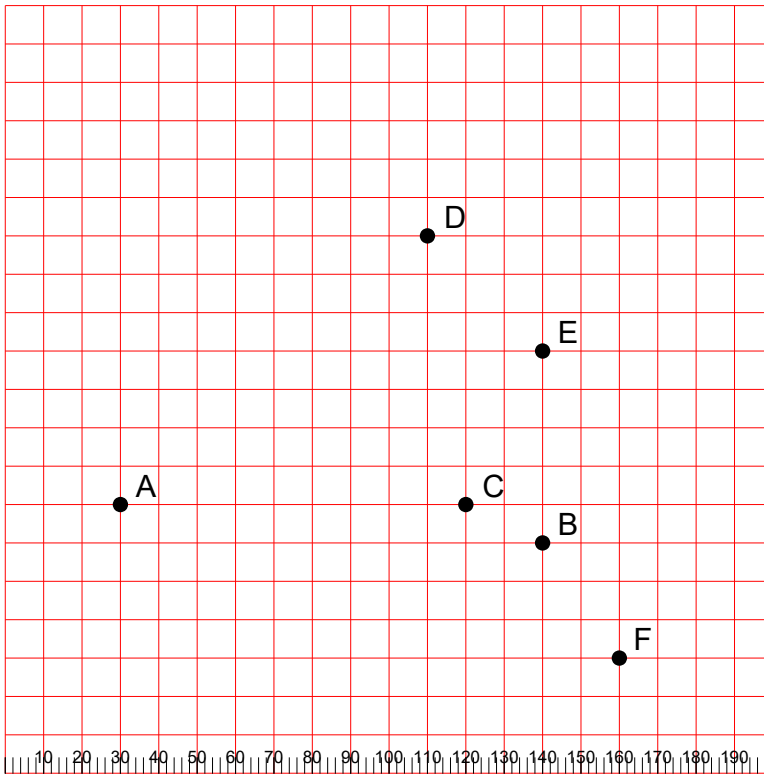
Velika logična pošast



Izmeri razdalje med točkami

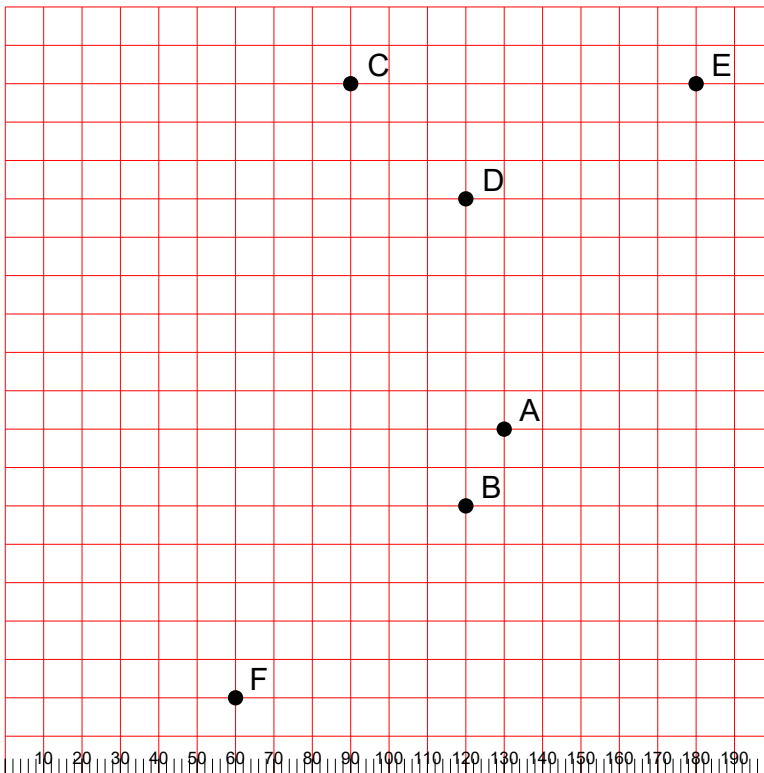
Dane so točke A, B, C, ...
Izmeri razdalje med točkami:
 $|AB|$, $|AC|$, ..., $|BC|$, ...
Uporabi spodnje ravnilo.

1.



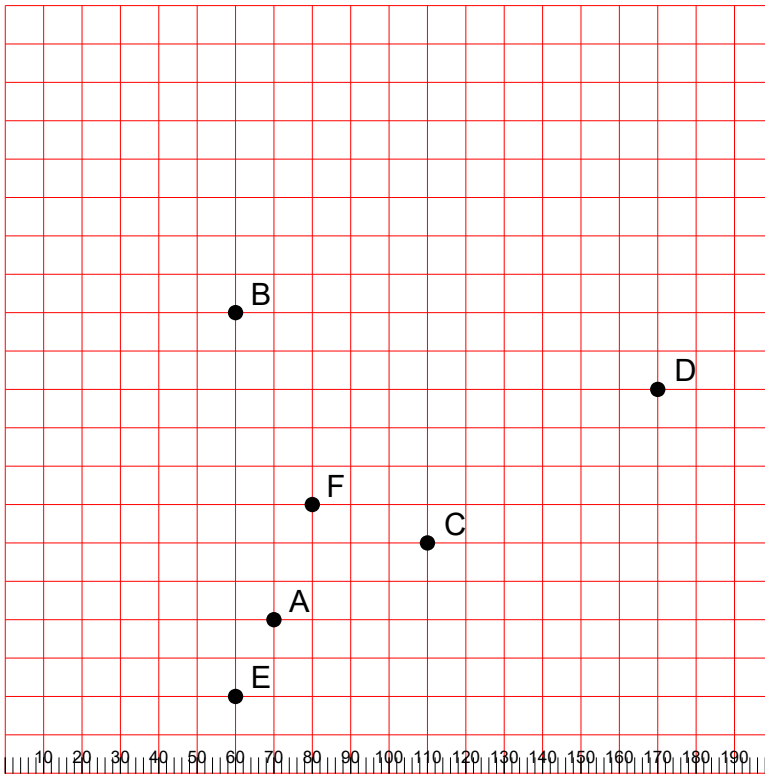
- | AB | =
- | AC | =
- | AD | =
- | AE | =
- | AF | =
- | BC | =
- | BD | =
- | BE | =
- | BF | =
- | CD | =
- | CE | =
- | CF | =
- | DE | =
- | DF | =
- | EF | =

2.



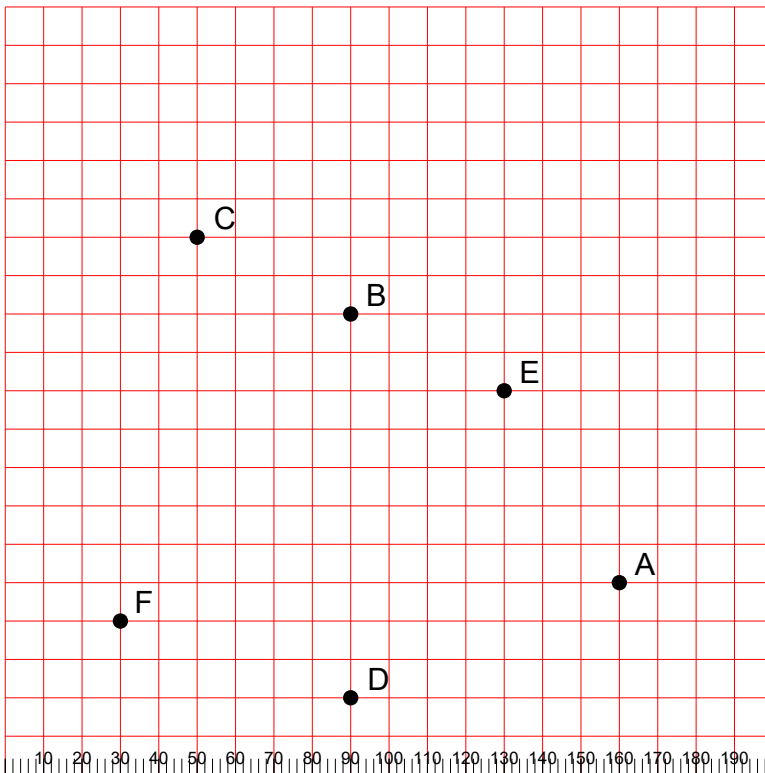
- | AB | =
- | AC | =
- | AD | =
- | AE | =
- | AF | =
- | BC | =
- | BD | =
- | BE | =
- | BF | =
- | CD | =
- | CE | =
- | CF | =
- | DE | =
- | DF | =
- | EF | =

3.



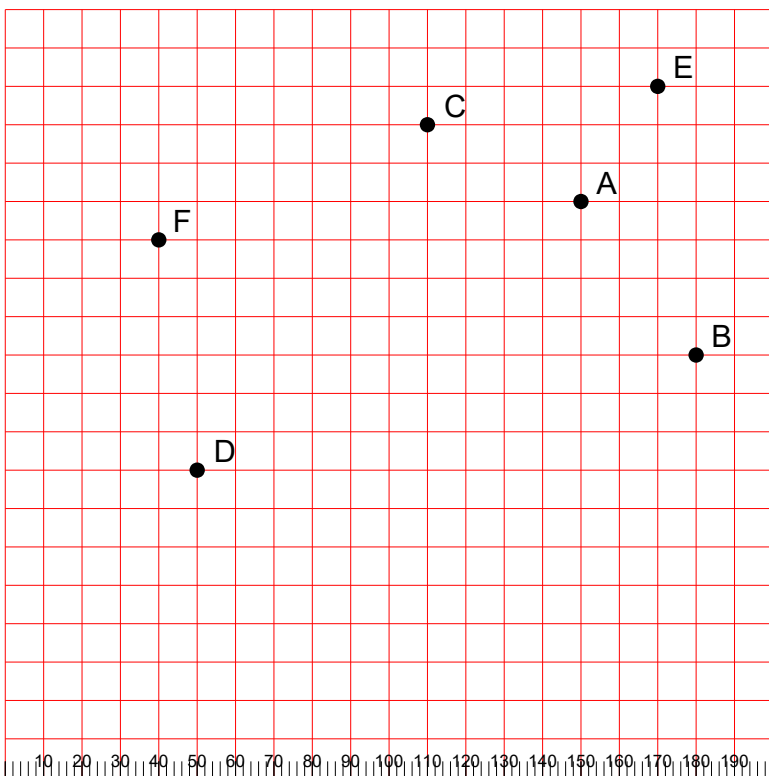
$|AB| =$
 $|AC| =$
 $|AD| =$
 $|AE| =$
 $|AF| =$
 $|BC| =$
 $|BD| =$
 $|BE| =$
 $|BF| =$
 $|CD| =$
 $|CE| =$
 $|CF| =$
 $|DE| =$
 $|DF| =$
 $|EF| =$

4.



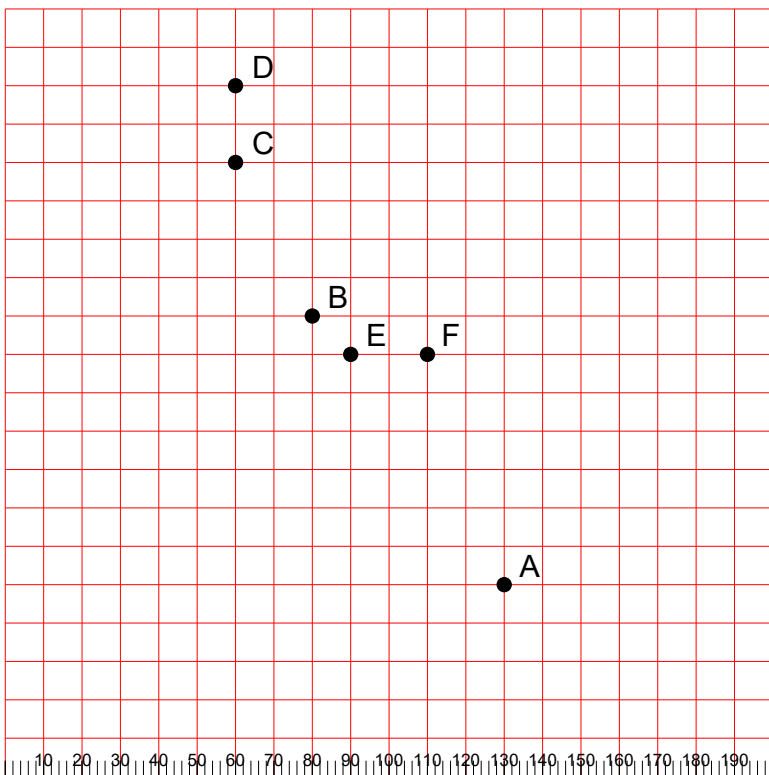
$|AB| =$
 $|AC| =$
 $|AD| =$
 $|AE| =$
 $|AF| =$
 $|BC| =$
 $|BD| =$
 $|BE| =$
 $|BF| =$
 $|CD| =$
 $|CE| =$
 $|CF| =$
 $|DE| =$
 $|DF| =$
 $|EF| =$

5.



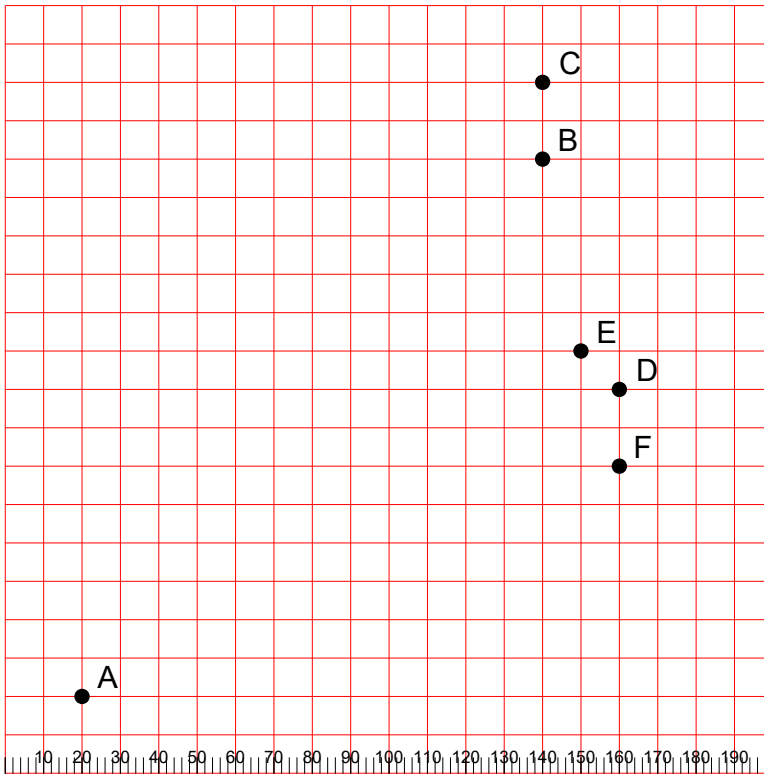
- | AB | =
- | AC | =
- | AD | =
- | AE | =
- | AF | =
- | BC | =
- | BD | =
- | BE | =
- | BF | =
- | CD | =
- | CE | =
- | CF | =
- | DE | =
- | DF | =
- | EF | =

6.



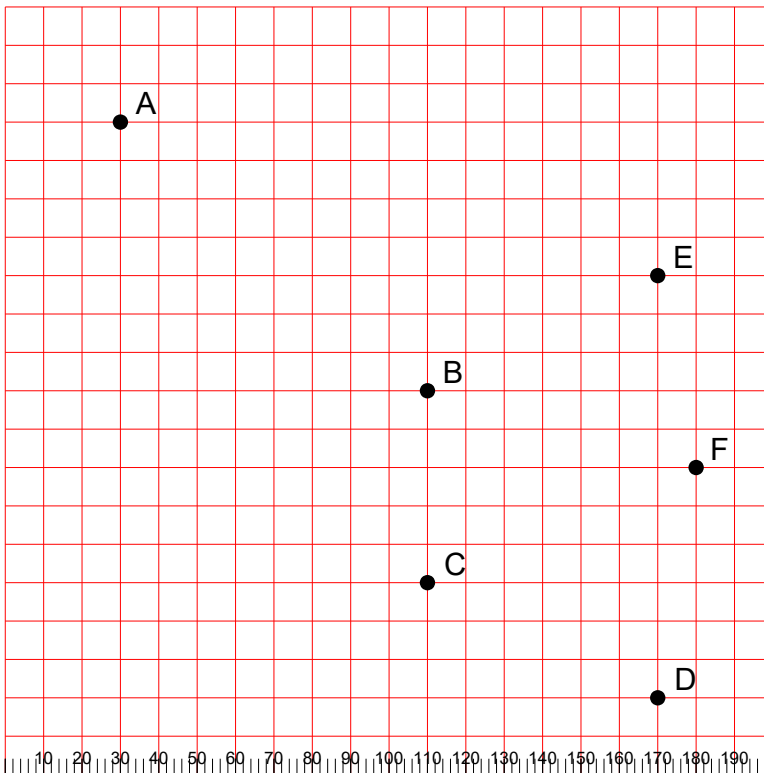
- | AB | =
- | AC | =
- | AD | =
- | AE | =
- | AF | =
- | BC | =
- | BD | =
- | BE | =
- | BF | =
- | CD | =
- | CE | =
- | CF | =
- | DE | =
- | DF | =
- | EF | =

7.



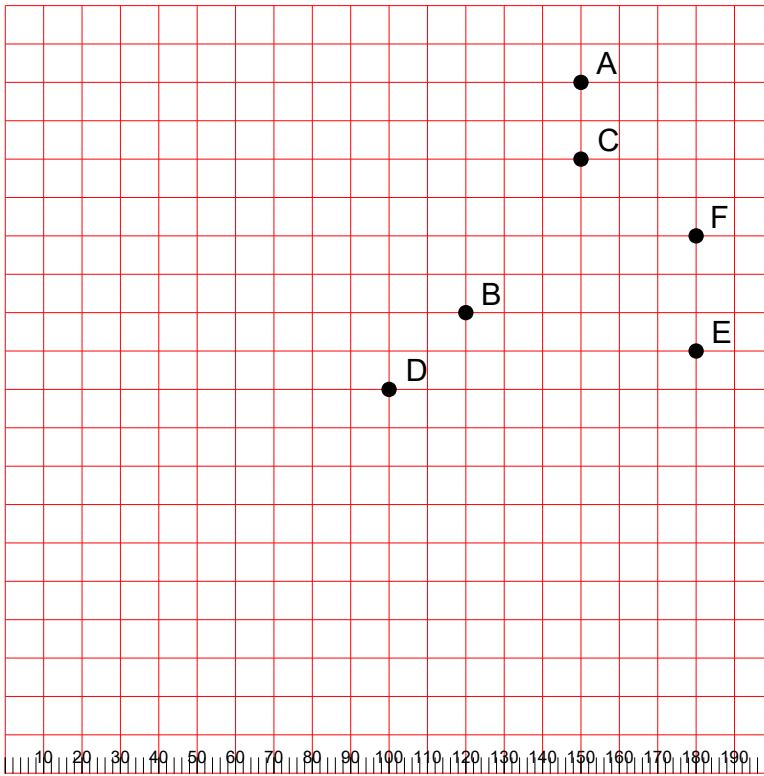
$|AB| =$
 $|AC| =$
 $|AD| =$
 $|AE| =$
 $|AF| =$
 $|BC| =$
 $|BD| =$
 $|BE| =$
 $|BF| =$
 $|CD| =$
 $|CE| =$
 $|CF| =$
 $|DE| =$
 $|DF| =$
 $|EF| =$

8.



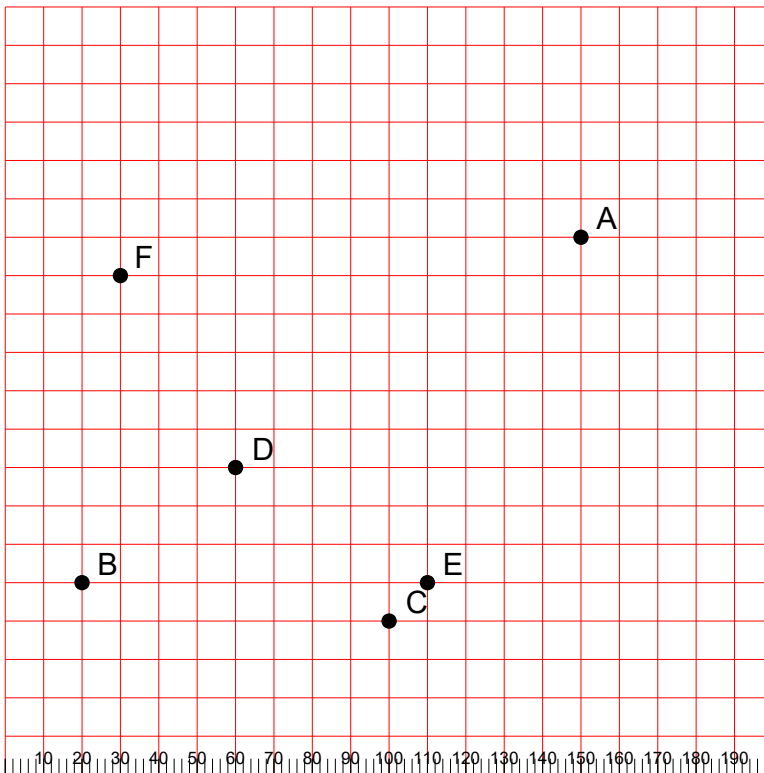
$|AB| =$
 $|AC| =$
 $|AD| =$
 $|AE| =$
 $|AF| =$
 $|BC| =$
 $|BD| =$
 $|BE| =$
 $|BF| =$
 $|CD| =$
 $|CE| =$
 $|CF| =$
 $|DE| =$
 $|DF| =$
 $|EF| =$

9.



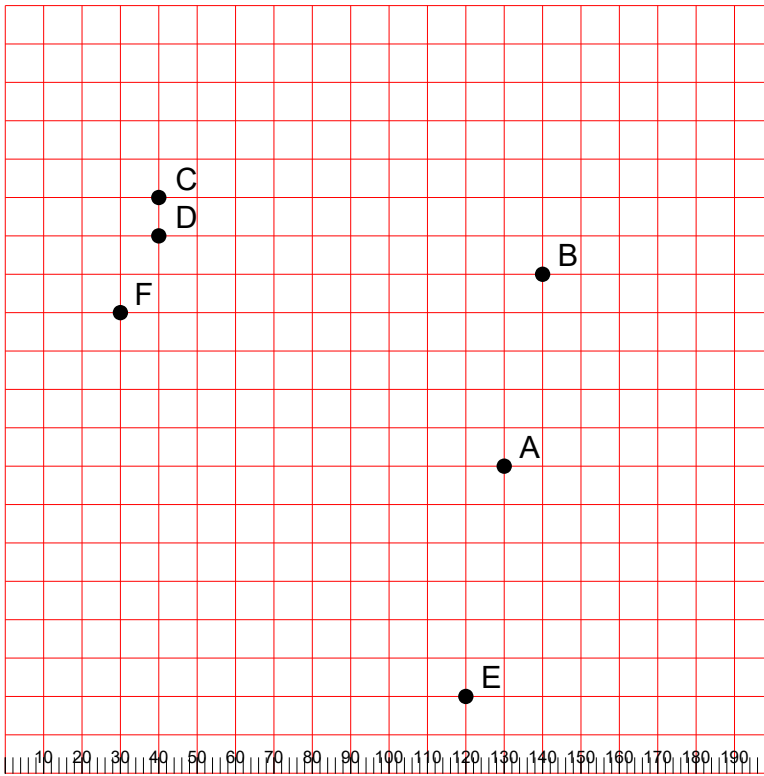
- | AB | =
- | AC | =
- | AD | =
- | AE | =
- | AF | =
- | BC | =
- | BD | =
- | BE | =
- | BF | =
- | CD | =
- | CE | =
- | CF | =
- | DE | =
- | DF | =
- | EF | =

10.



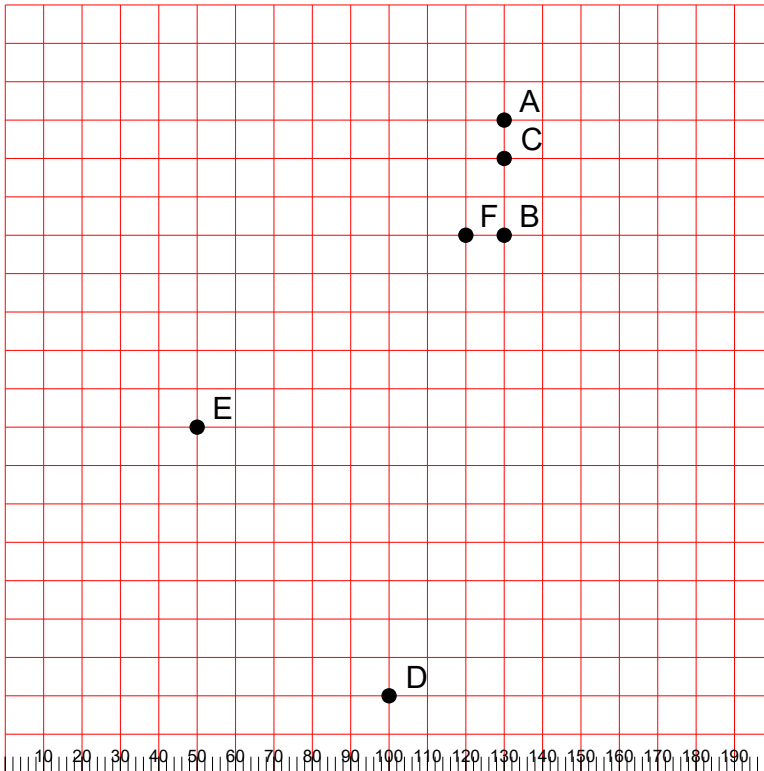
- | AB | =
- | AC | =
- | AD | =
- | AE | =
- | AF | =
- | BC | =
- | BD | =
- | BE | =
- | BF | =
- | CD | =
- | CE | =
- | CF | =
- | DE | =
- | DF | =
- | EF | =

11.



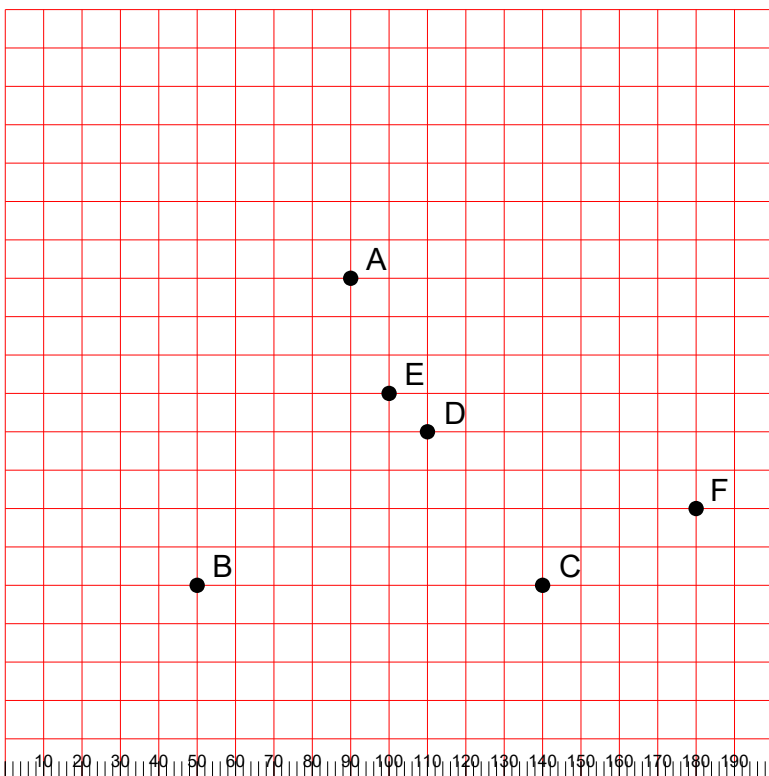
$|AB| =$
 $|AC| =$
 $|AD| =$
 $|AE| =$
 $|AF| =$
 $|BC| =$
 $|BD| =$
 $|BE| =$
 $|BF| =$
 $|CD| =$
 $|CE| =$
 $|CF| =$
 $|DE| =$
 $|DF| =$
 $|EF| =$

12.



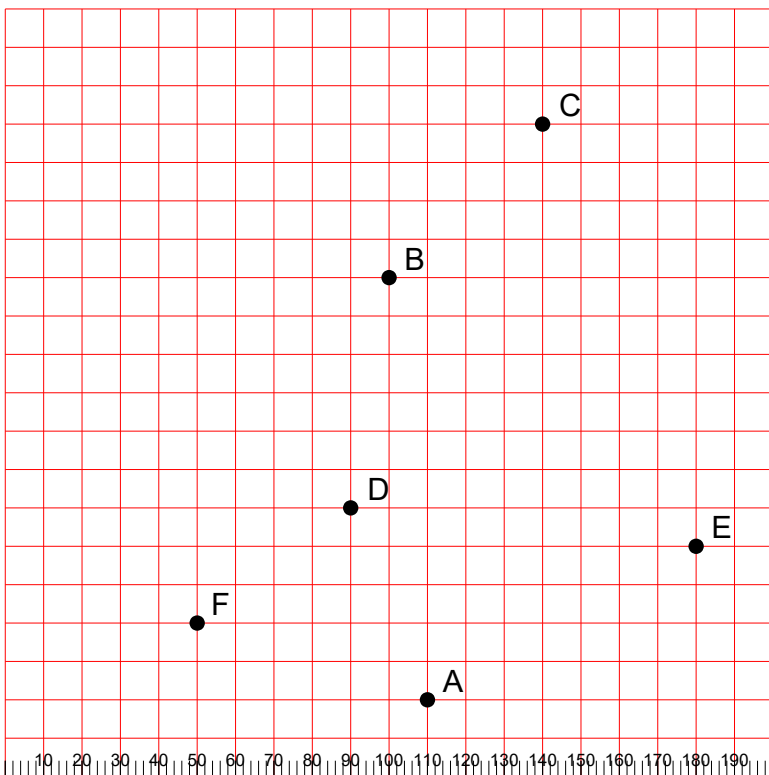
$|AB| =$
 $|AC| =$
 $|AD| =$
 $|AE| =$
 $|AF| =$
 $|BC| =$
 $|BD| =$
 $|BE| =$
 $|BF| =$
 $|CD| =$
 $|CE| =$
 $|CF| =$
 $|DE| =$
 $|DF| =$
 $|EF| =$

13.



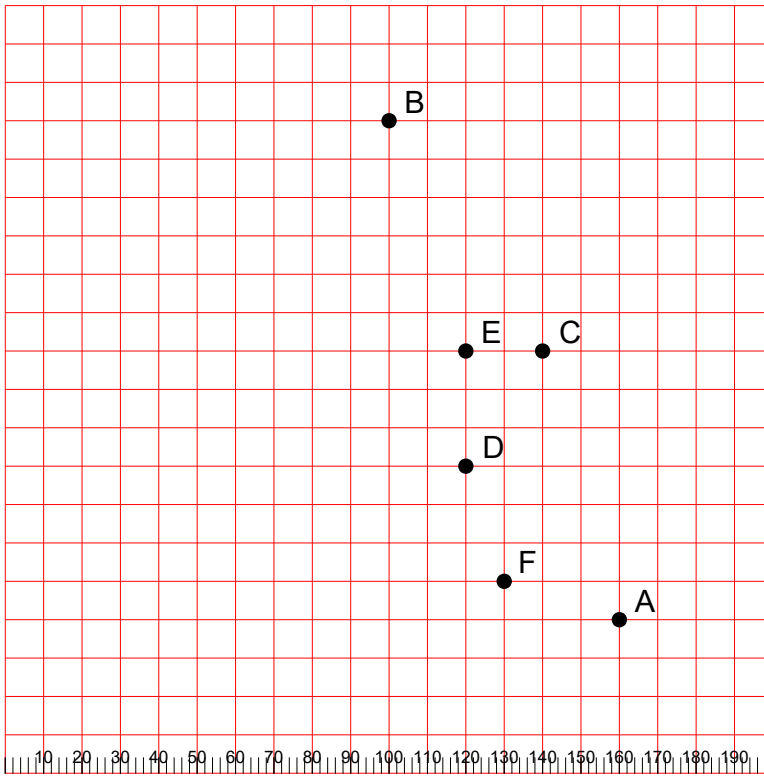
- | AB | =
- | AC | =
- | AD | =
- | AE | =
- | AF | =
- | BC | =
- | BD | =
- | BE | =
- | BF | =
- | CD | =
- | CE | =
- | CF | =
- | DE | =
- | DF | =
- | EF | =

14.



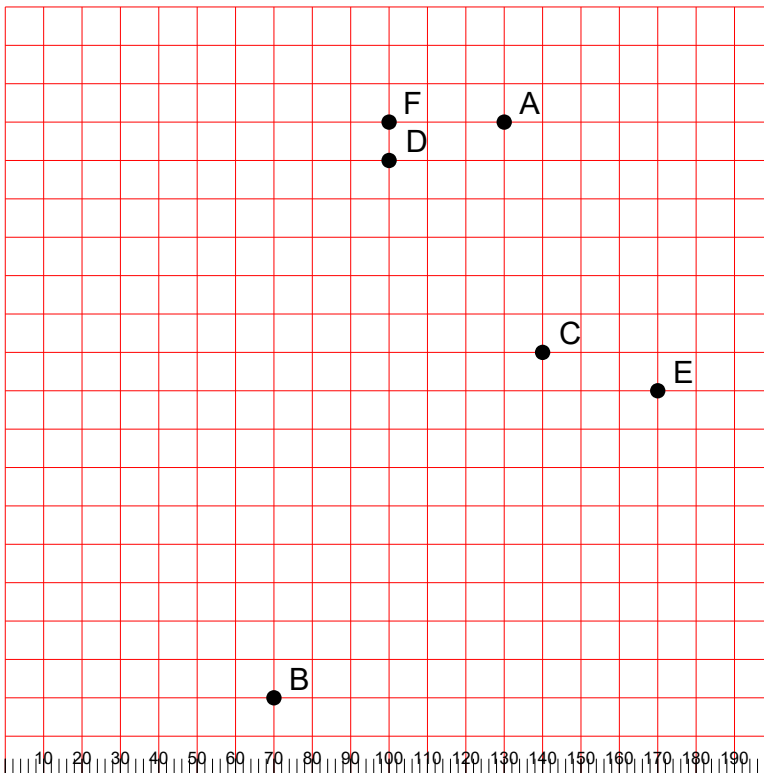
- | AB | =
- | AC | =
- | AD | =
- | AE | =
- | AF | =
- | BC | =
- | BD | =
- | BE | =
- | BF | =
- | CD | =
- | CE | =
- | CF | =
- | DE | =
- | DF | =
- | EF | =

15.



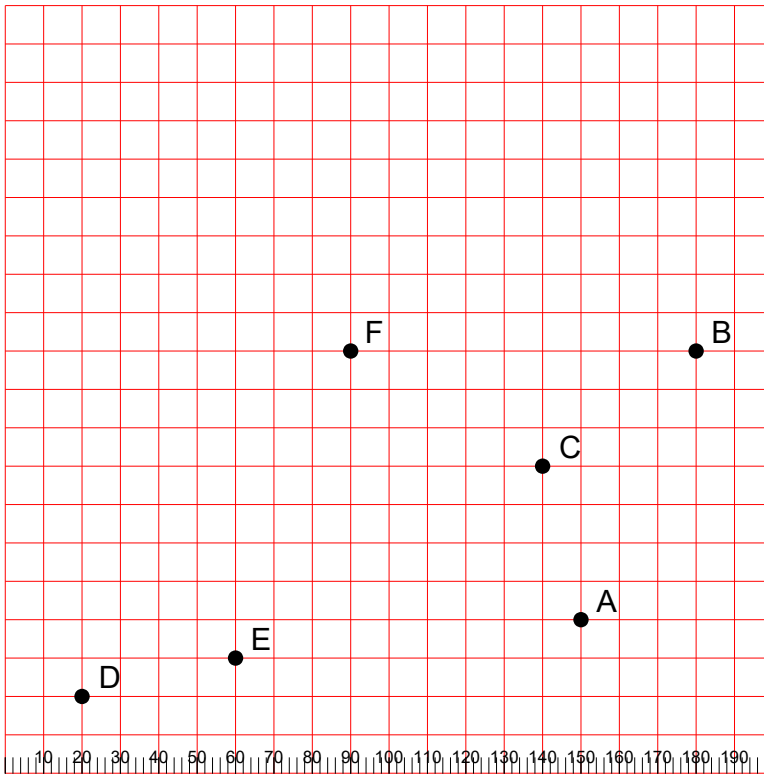
$|AB| =$
 $|AC| =$
 $|AD| =$
 $|AE| =$
 $|AF| =$
 $|BC| =$
 $|BD| =$
 $|BE| =$
 $|BF| =$
 $|CD| =$
 $|CE| =$
 $|CF| =$
 $|DE| =$
 $|DF| =$
 $|EF| =$

16.



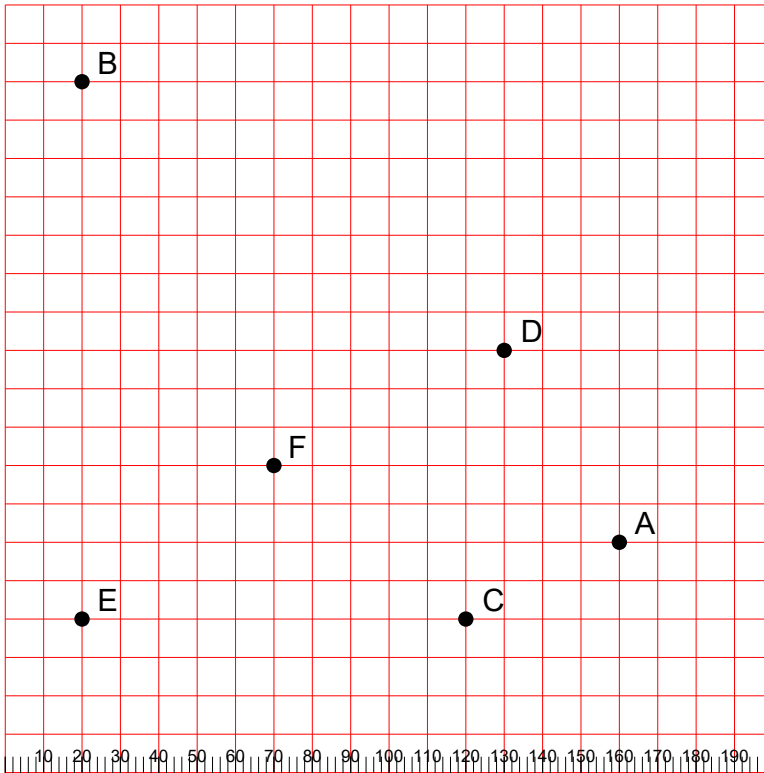
$|AB| =$
 $|AC| =$
 $|AD| =$
 $|AE| =$
 $|AF| =$
 $|BC| =$
 $|BD| =$
 $|BE| =$
 $|BF| =$
 $|CD| =$
 $|CE| =$
 $|CF| =$
 $|DE| =$
 $|DF| =$
 $|EF| =$

17.



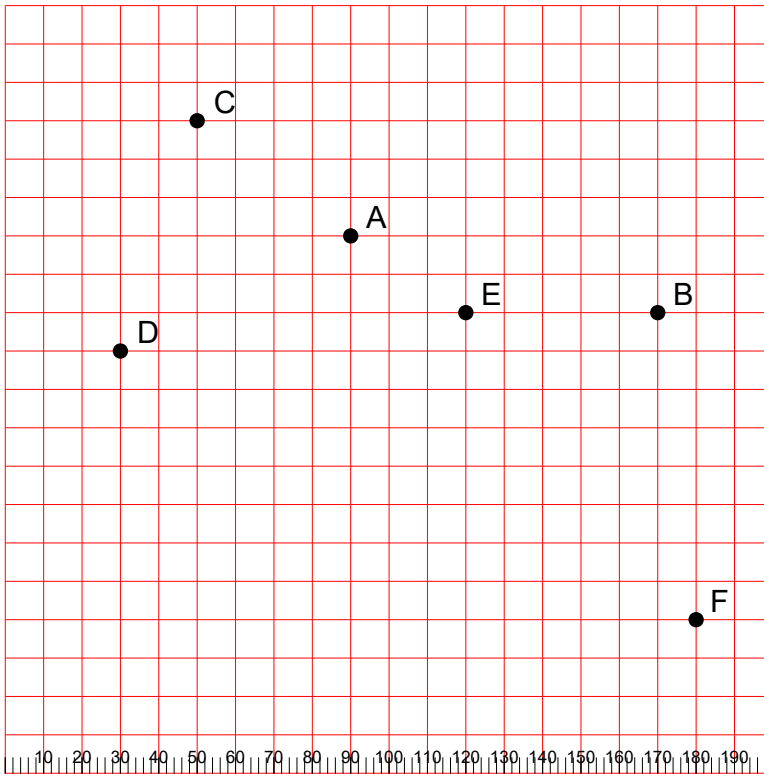
- | AB | =
- | AC | =
- | AD | =
- | AE | =
- | AF | =
- | BC | =
- | BD | =
- | BE | =
- | BF | =
- | CD | =
- | CE | =
- | CF | =
- | DE | =
- | DF | =
- | EF | =

18.



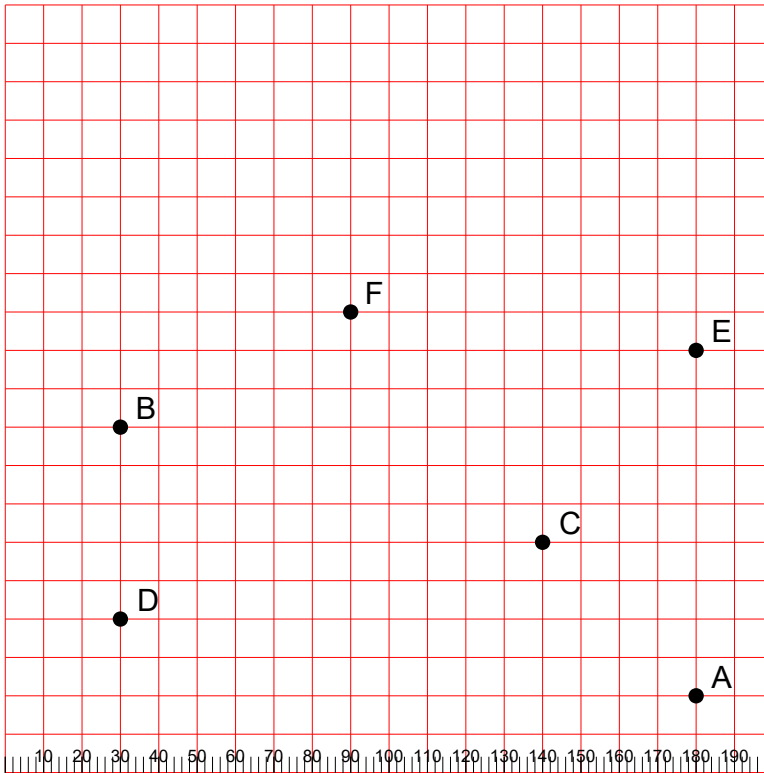
- | AB | =
- | AC | =
- | AD | =
- | AE | =
- | AF | =
- | BC | =
- | BD | =
- | BE | =
- | BF | =
- | CD | =
- | CE | =
- | CF | =
- | DE | =
- | DF | =
- | EF | =

19.



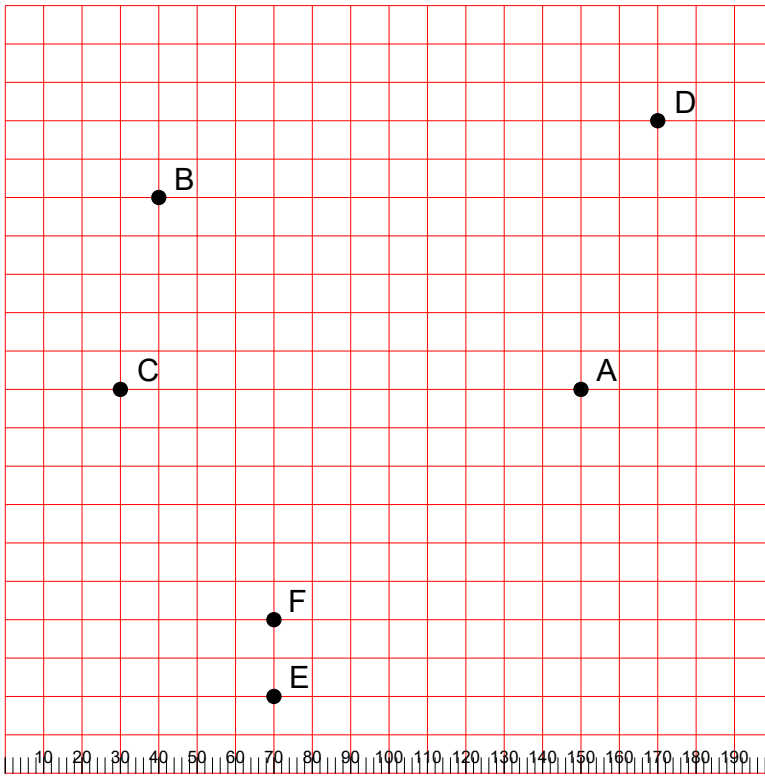
- | AB | =
- | AC | =
- | AD | =
- | AE | =
- | AF | =
- | BC | =
- | BD | =
- | BE | =
- | BF | =
- | CD | =
- | CE | =
- | CF | =
- | DE | =
- | DF | =
- | EF | =

20.



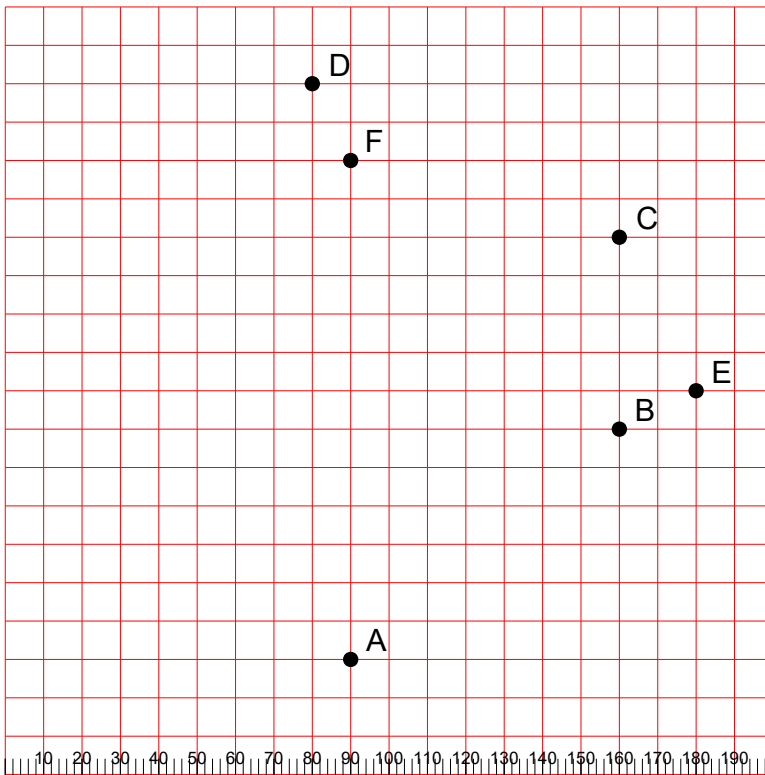
- | AB | =
- | AC | =
- | AD | =
- | AE | =
- | AF | =
- | BC | =
- | BD | =
- | BE | =
- | BF | =
- | CD | =
- | CE | =
- | CF | =
- | DE | =
- | DF | =
- | EF | =

21.



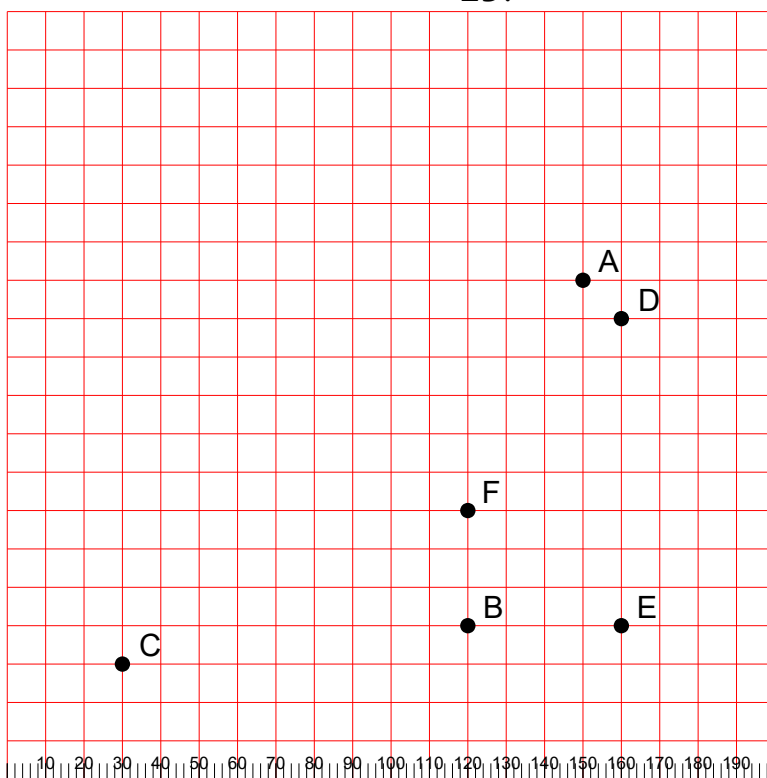
- | AB | =
- | AC | =
- | AD | =
- | AE | =
- | AF | =
- | BC | =
- | BD | =
- | BE | =
- | BF | =
- | CD | =
- | CE | =
- | CF | =
- | DE | =
- | DF | =
- | EF | =

22.



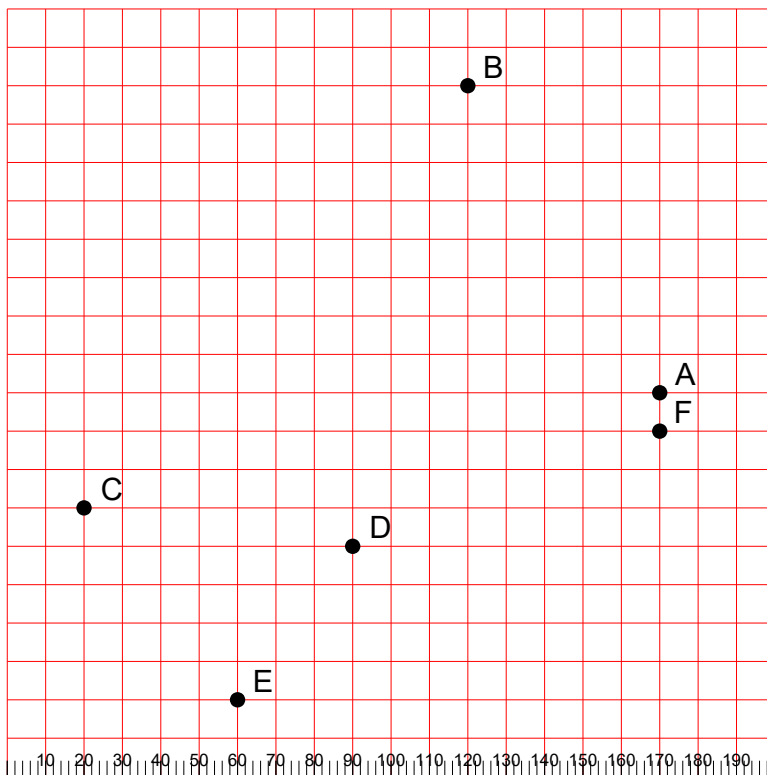
- | AB | =
- | AC | =
- | AD | =
- | AE | =
- | AF | =
- | BC | =
- | BD | =
- | BE | =
- | BF | =
- | CD | =
- | CE | =
- | CF | =
- | DE | =
- | DF | =
- | EF | =

23.



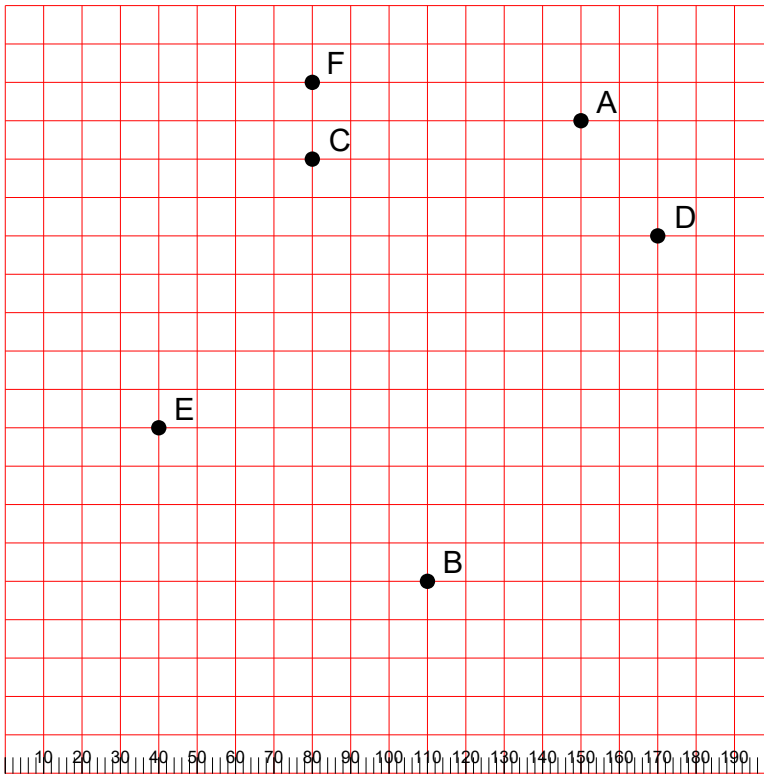
- | AB | =
- | AC | =
- | AD | =
- | AE | =
- | AF | =
- | BC | =
- | BD | =
- | BE | =
- | BF | =
- | CD | =
- | CE | =
- | CF | =
- | DE | =
- | DF | =
- | EF | =

24.



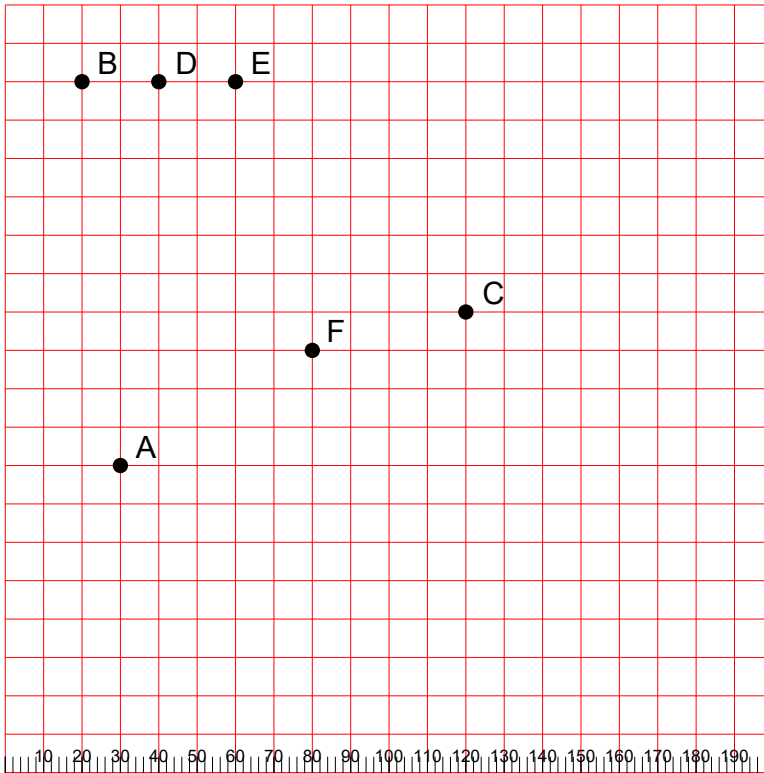
- | AB | =
- | AC | =
- | AD | =
- | AE | =
- | AF | =
- | BC | =
- | BD | =
- | BE | =
- | BF | =
- | CD | =
- | CE | =
- | CF | =
- | DE | =
- | DF | =
- | EF | =

25.



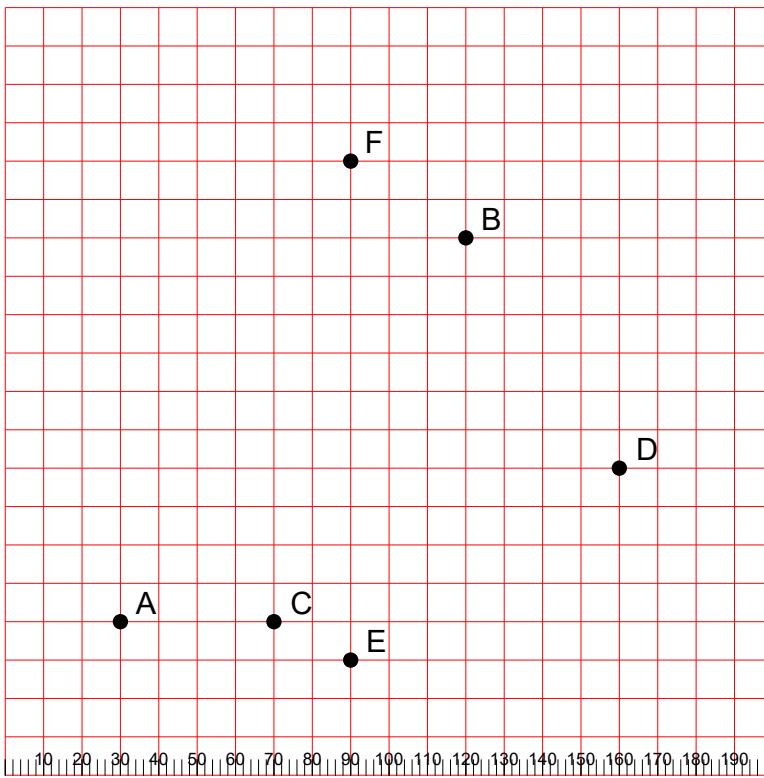
- | AB | =
- | AC | =
- | AD | =
- | AE | =
- | AF | =
- | BC | =
- | BD | =
- | BE | =
- | BF | =
- | CD | =
- | CE | =
- | CF | =
- | DE | =
- | DF | =
- | EF | =

26.



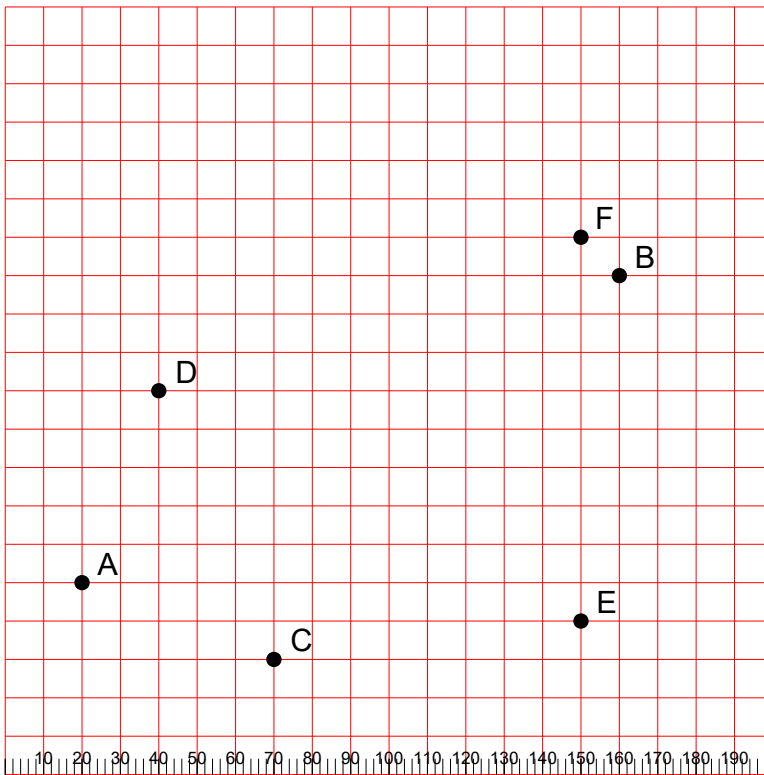
- | AB | =
- | AC | =
- | AD | =
- | AE | =
- | AF | =
- | BC | =
- | BD | =
- | BE | =
- | BF | =
- | CD | =
- | CE | =
- | CF | =
- | DE | =
- | DF | =
- | EF | =

27.



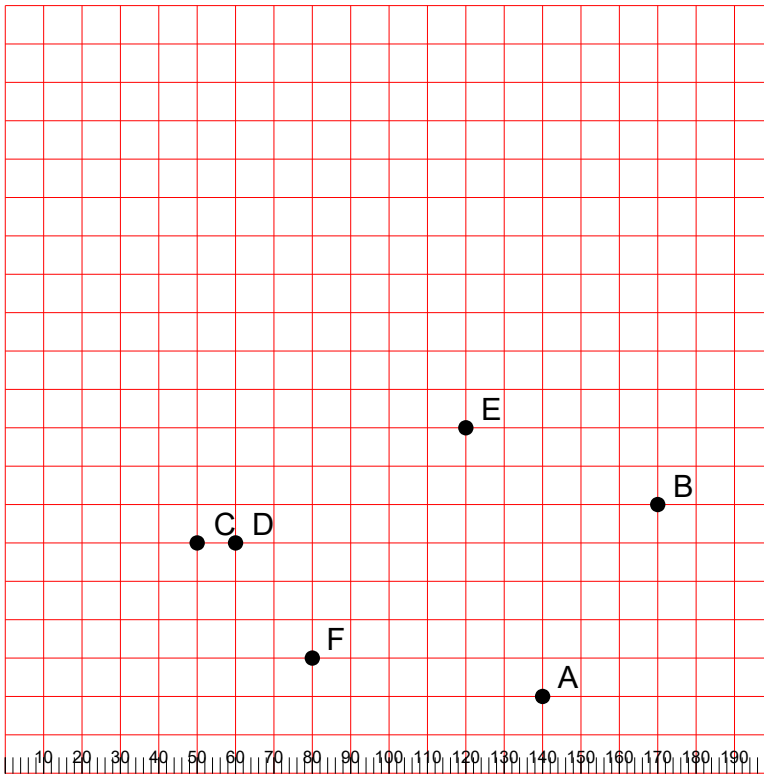
- | AB | =
- | AC | =
- | AD | =
- | AE | =
- | AF | =
- | BC | =
- | BD | =
- | BE | =
- | BF | =
- | CD | =
- | CE | =
- | CF | =
- | DE | =
- | DF | =
- | EF | =

28.



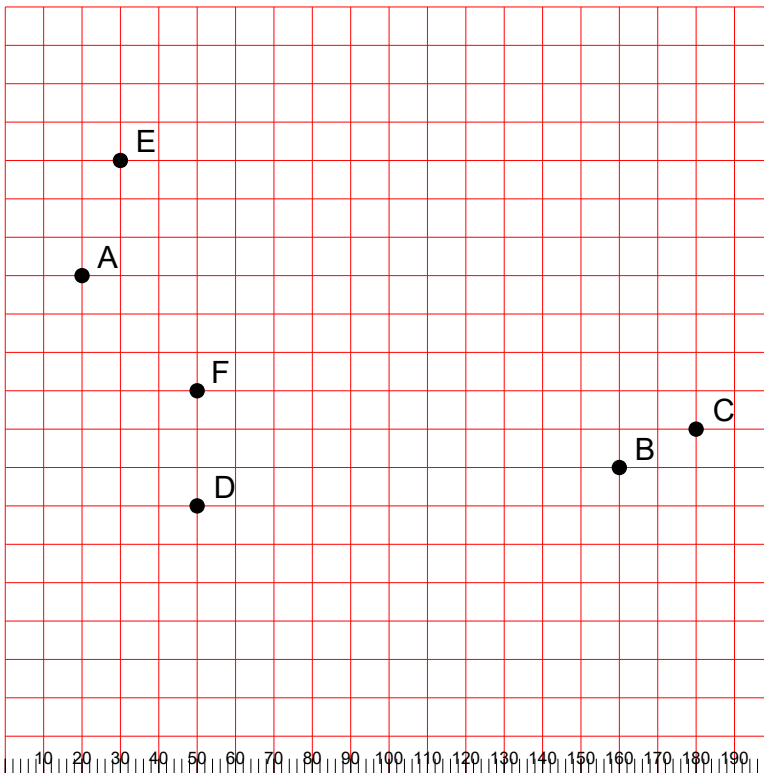
- | AB | =
- | AC | =
- | AD | =
- | AE | =
- | AF | =
- | BC | =
- | BD | =
- | BE | =
- | BF | =
- | CD | =
- | CE | =
- | CF | =
- | DE | =
- | DF | =
- | EF | =

29.



- | AB | =
- | AC | =
- | AD | =
- | AE | =
- | AF | =
- | BC | =
- | BD | =
- | BE | =
- | BF | =
- | CD | =
- | CE | =
- | CF | =
- | DE | =
- | DF | =
- | EF | =

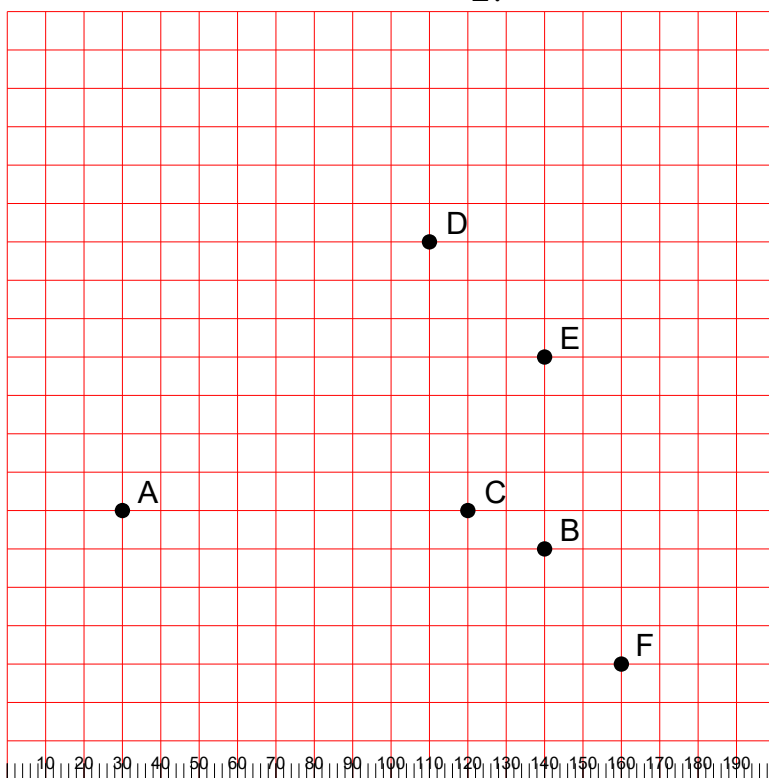
30.



- | AB | =
- | AC | =
- | AD | =
- | AE | =
- | AF | =
- | BC | =
- | BD | =
- | BE | =
- | BF | =
- | CD | =
- | CE | =
- | CF | =
- | DE | =
- | DF | =
- | EF | =

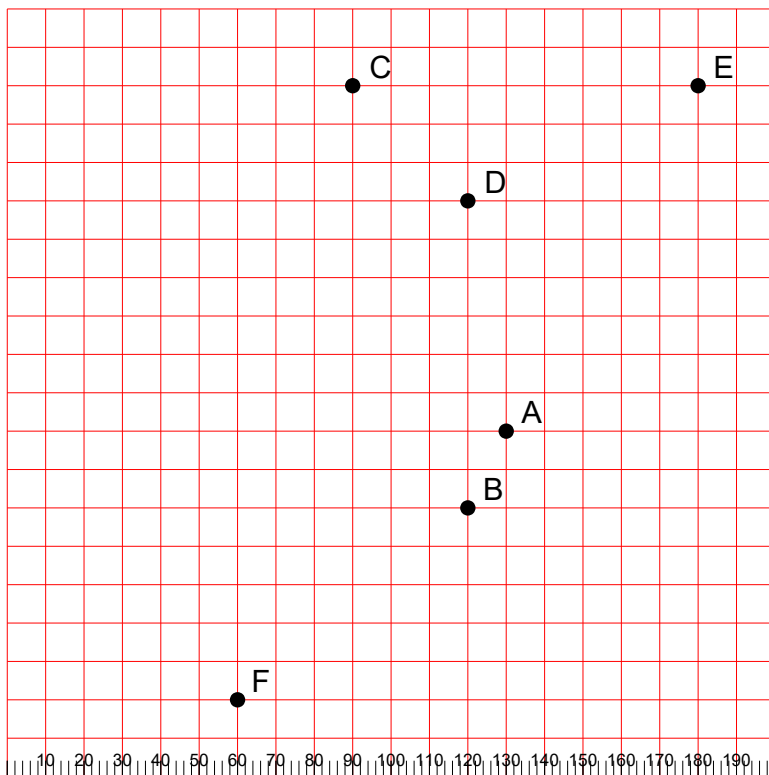
Rešitve:

1.



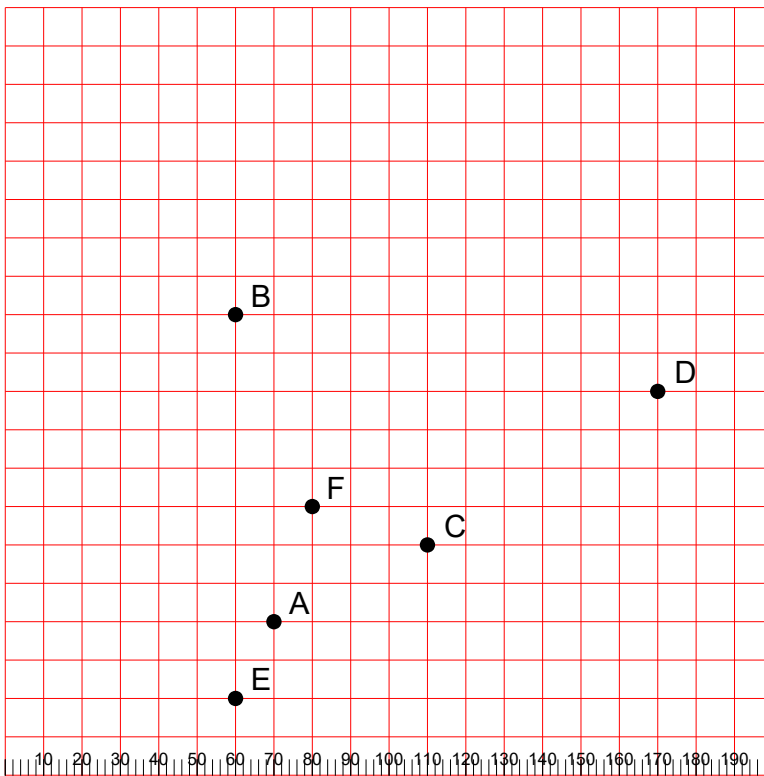
AB	=	110
AC	=	90
AD	=	106
AE	=	117
AF	=	136
BC	=	22
BD	=	85
BE	=	50
BF	=	36
CD	=	71
CE	=	45
CF	=	57
DE	=	42
DF	=	121
EF	=	82

2.



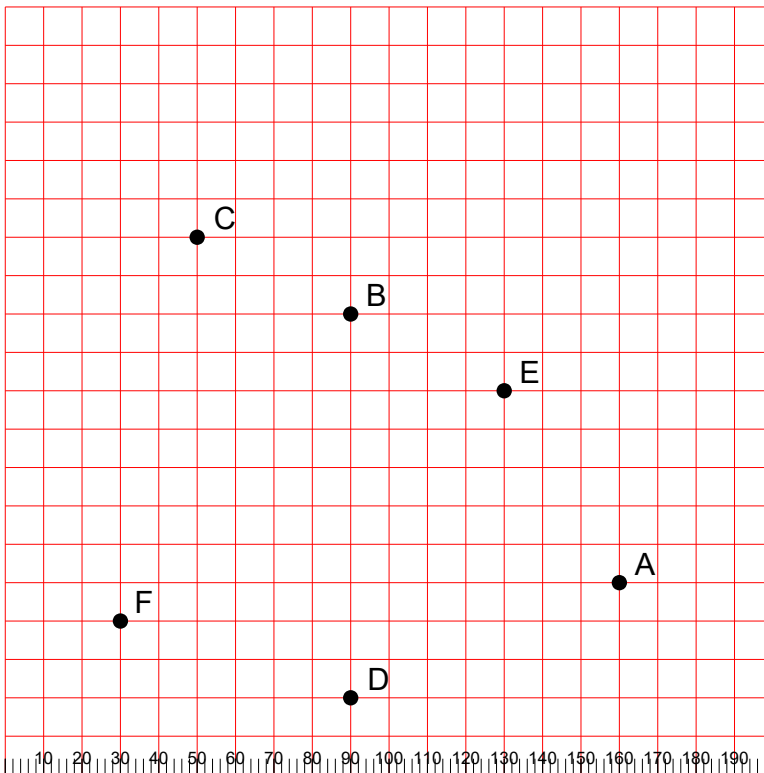
AB	=	22
AC	=	98
AD	=	61
AE	=	103
AF	=	99
BC	=	114
BD	=	80
BE	=	125
BF	=	78
CD	=	42
CE	=	90
CF	=	163
DE	=	67
DF	=	143
EF	=	200

3.



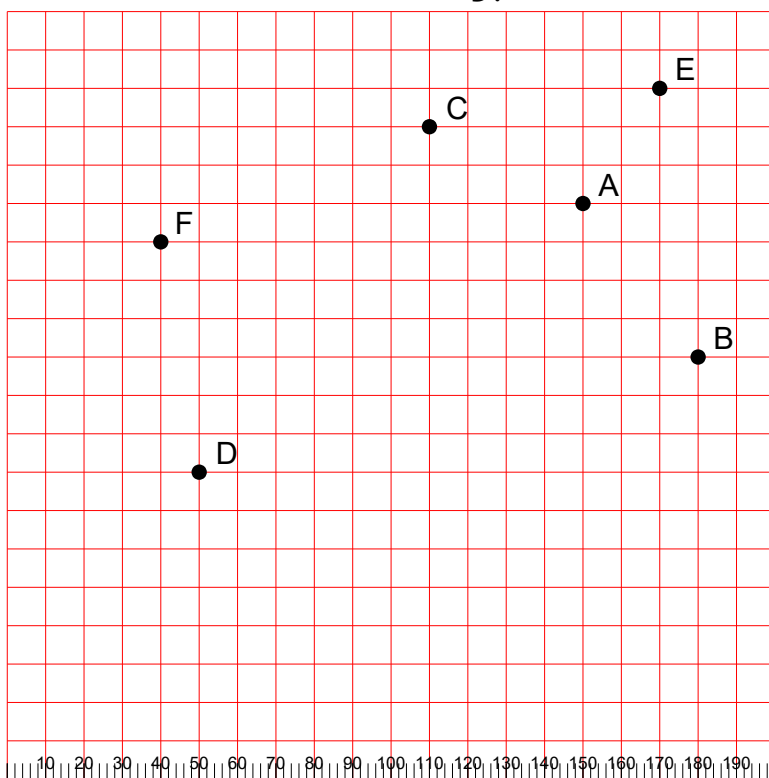
AB	=	81
AC	=	45
AD	=	117
AE	=	22
AF	=	32
BC	=	78
BD	=	112
BE	=	100
BF	=	54
CD	=	72
CE	=	64
CF	=	32
DE	=	136
DF	=	95
EF	=	54

4.



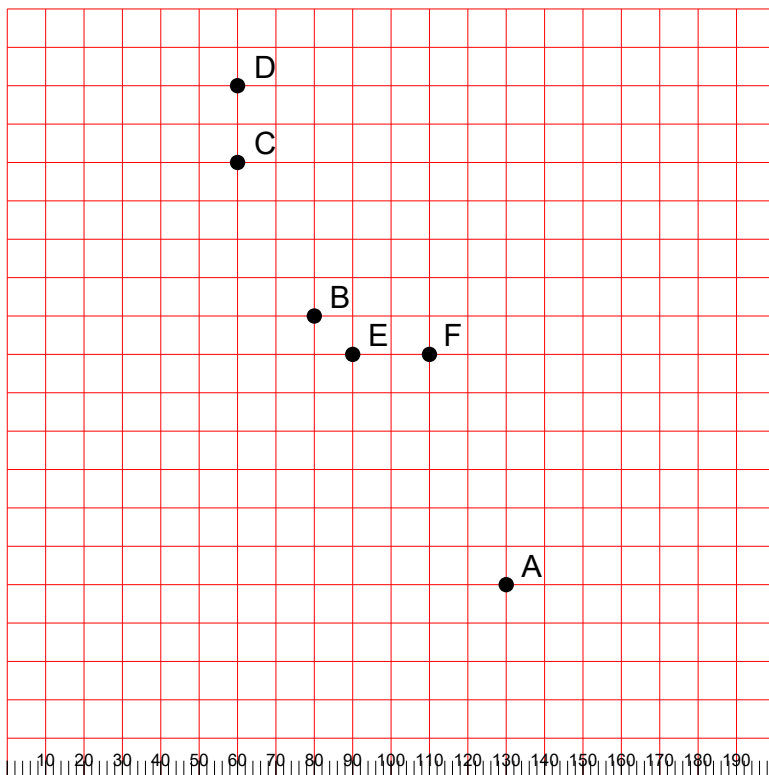
AB	=	99
AC	=	142
AD	=	76
AE	=	58
AF	=	130
BC	=	45
BD	=	100
BE	=	45
BF	=	100
CD	=	126
CE	=	89
CF	=	102
DE	=	89
DF	=	63
EF	=	117

5.



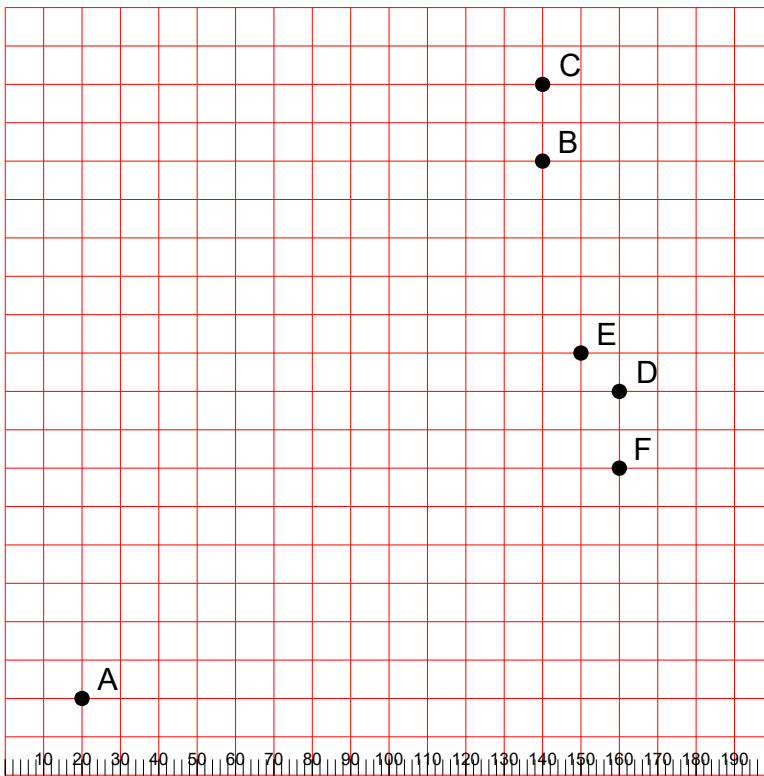
AB	=	50
AC	=	45
AD	=	122
AE	=	36
AF	=	110
BC	=	92
BD	=	133
BE	=	71
BF	=	143
CD	=	108
CE	=	61
CF	=	76
DE	=	156
DF	=	61
EF	=	136

6.



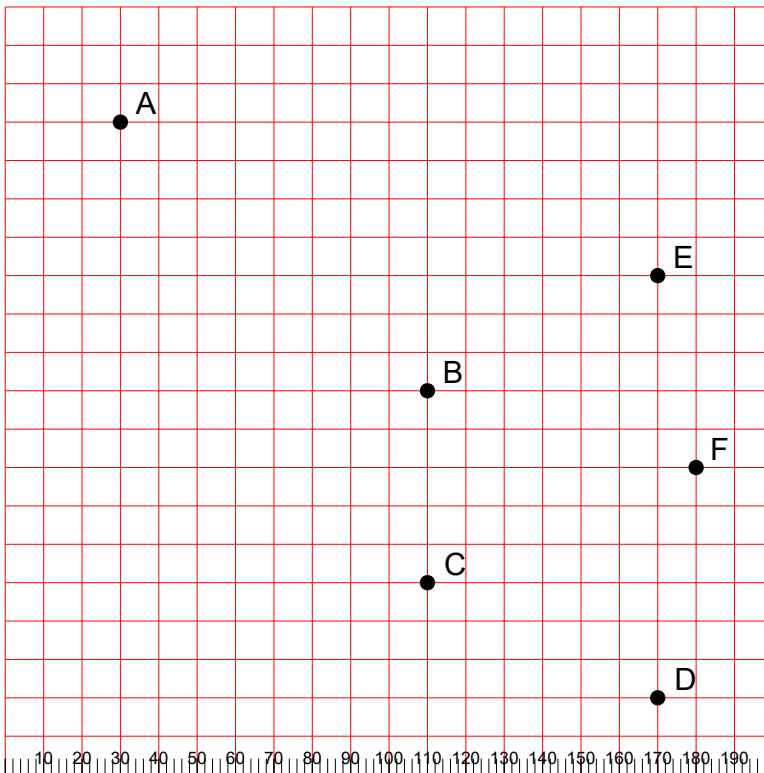
AB	=	86
AC	=	130
AD	=	148
AE	=	72
AF	=	63
BC	=	45
BD	=	63
BE	=	14
BF	=	32
CD	=	20
CE	=	58
CF	=	71
DE	=	76
DF	=	86
EF	=	20

7.



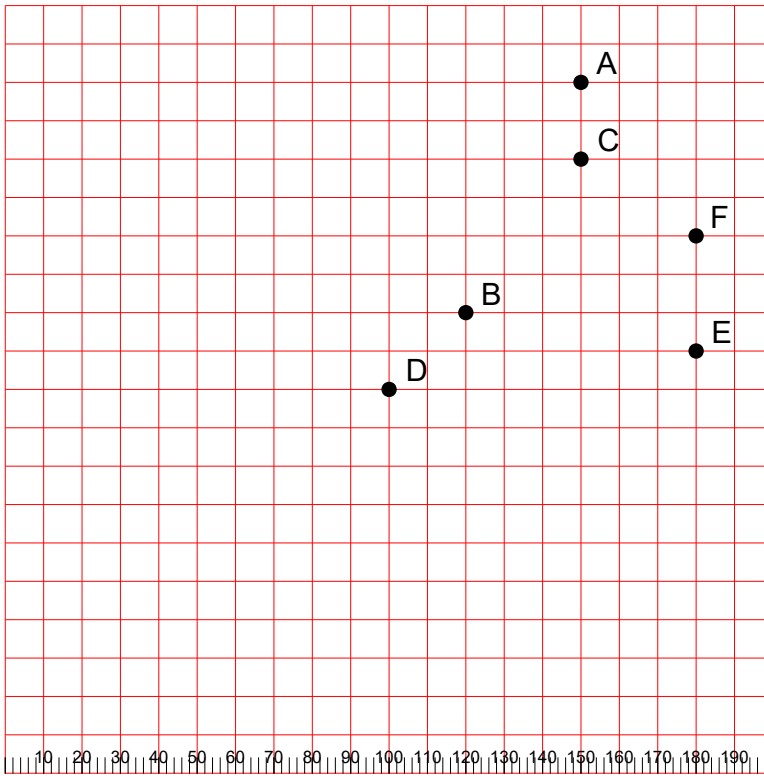
AB	=	184
AC	=	200
AD	=	161
AE	=	158
AF	=	152
BC	=	20
BD	=	63
BE	=	51
BF	=	82
CD	=	82
CE	=	71
CF	=	102
DE	=	14
DF	=	20
EF	=	32

8.



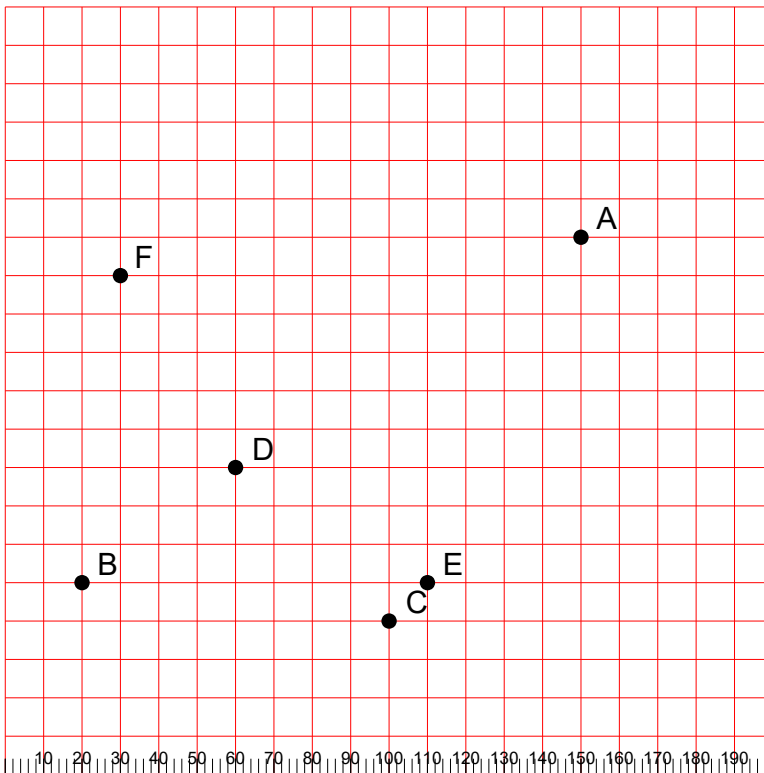
AB	=	106
AC	=	144
AD	=	205
AE	=	146
AF	=	175
BC	=	50
BD	=	100
BE	=	67
BF	=	73
CD	=	67
CE	=	100
CF	=	76
DE	=	110
DF	=	61
EF	=	51

9.



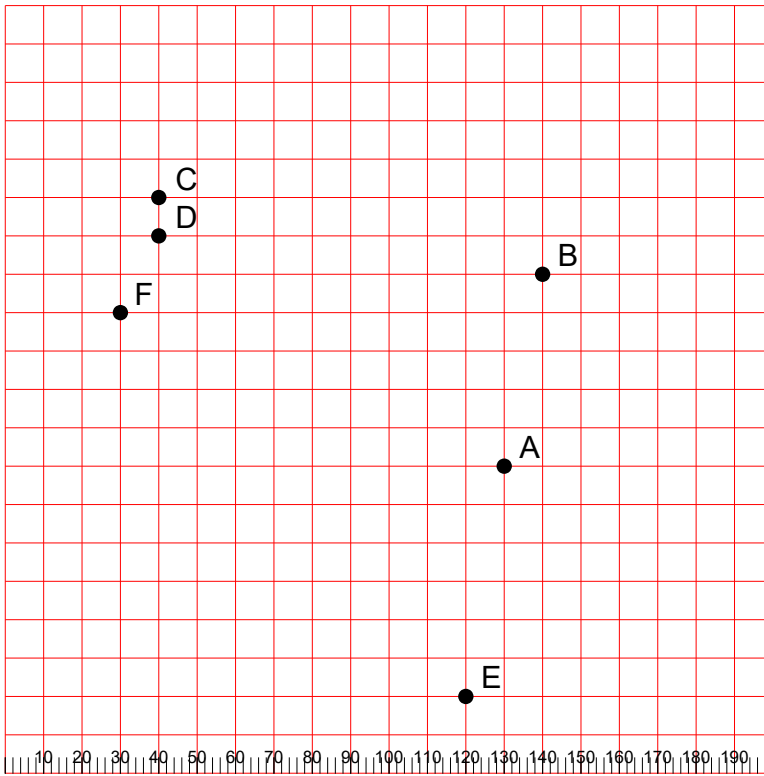
AB	=	67
AC	=	20
AD	=	94
AE	=	76
AF	=	50
BC	=	50
BD	=	28
BE	=	61
BF	=	63
CD	=	78
CE	=	58
CF	=	36
DE	=	81
DF	=	89
EF	=	30

10.



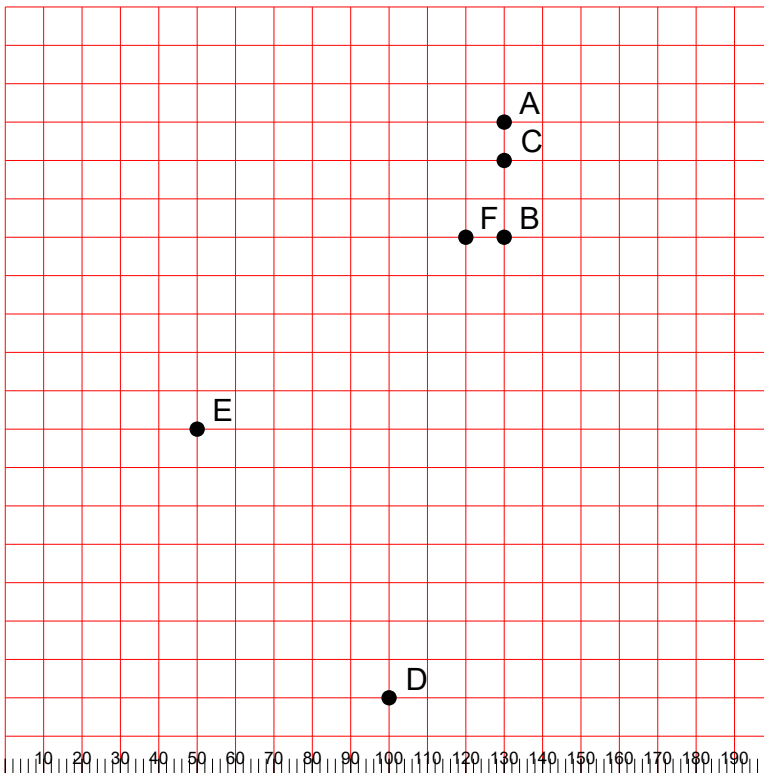
AB	=	158
AC	=	112
AD	=	108
AE	=	98
AF	=	120
BC	=	81
BD	=	50
BE	=	90
BF	=	81
CD	=	57
CE	=	14
CF	=	114
DE	=	58
DF	=	58
EF	=	113

11.



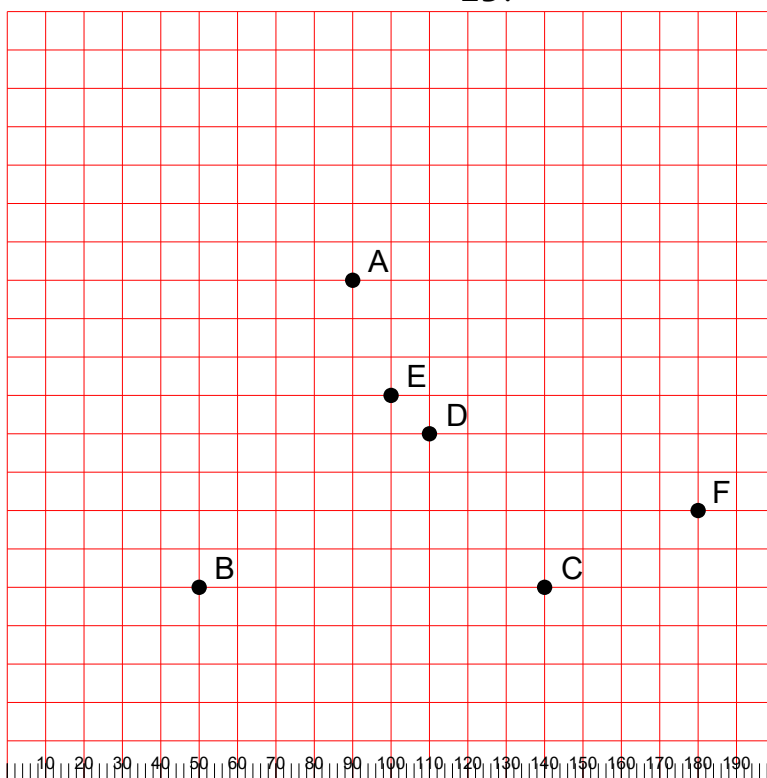
AB	=	51
AC	=	114
AD	=	108
AE	=	61
AF	=	108
BC	=	102
BD	=	100
BE	=	112
BF	=	110
CD	=	10
CE	=	153
CF	=	32
DE	=	144
DF	=	22
EF	=	135

12.



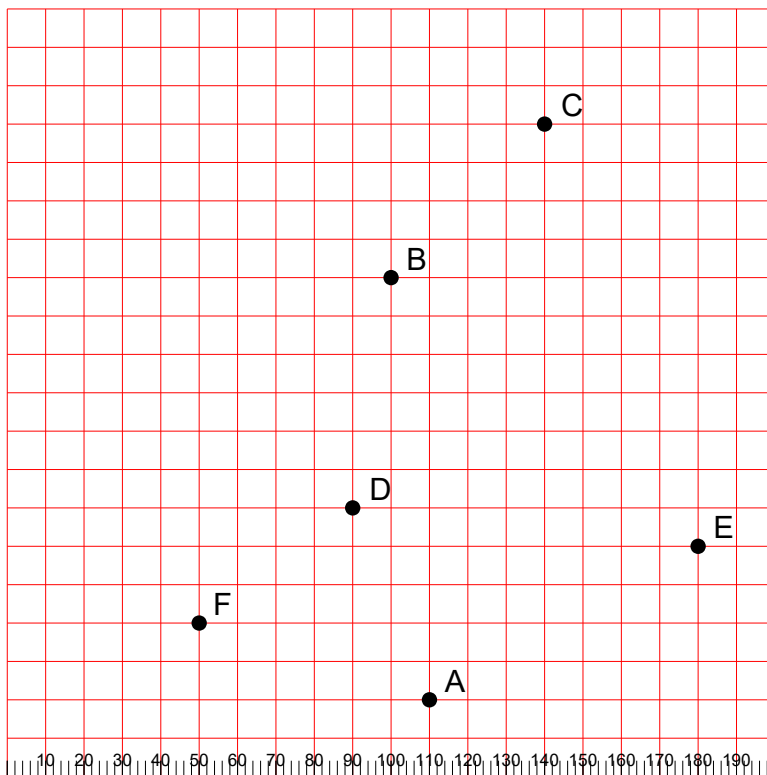
AB	=	30
AC	=	10
AD	=	153
AE	=	113
AF	=	32
BC	=	20
BD	=	124
BE	=	94
BF	=	10
CD	=	143
CE	=	106
CF	=	22
DE	=	86
DF	=	122
EF	=	86

13.



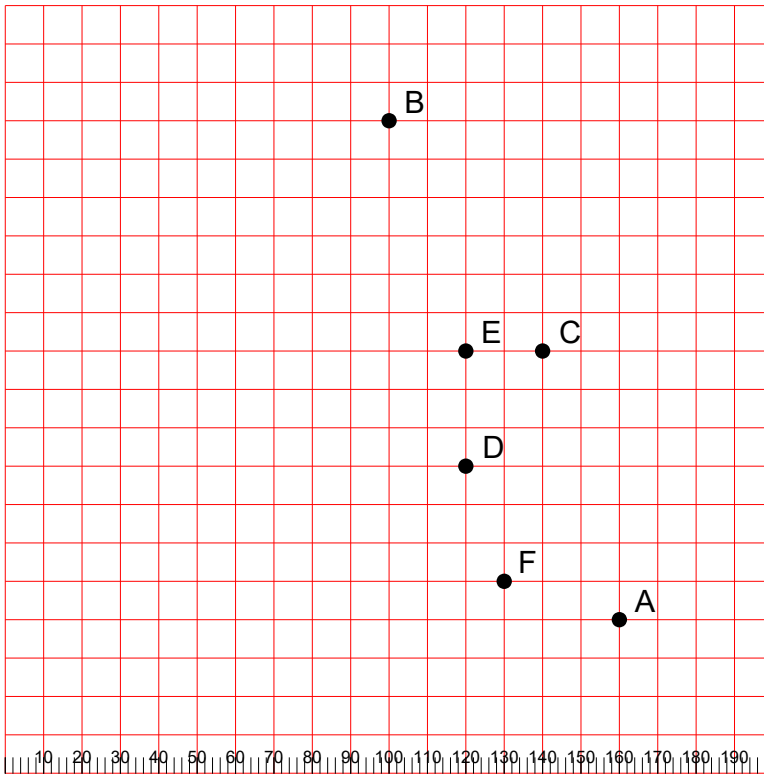
AB	=	89
AC	=	94
AD	=	45
AE	=	32
AF	=	108
BC	=	90
BD	=	72
BE	=	71
BF	=	132
CD	=	50
CE	=	64
CF	=	45
DE	=	14
DF	=	73
EF	=	85

14.



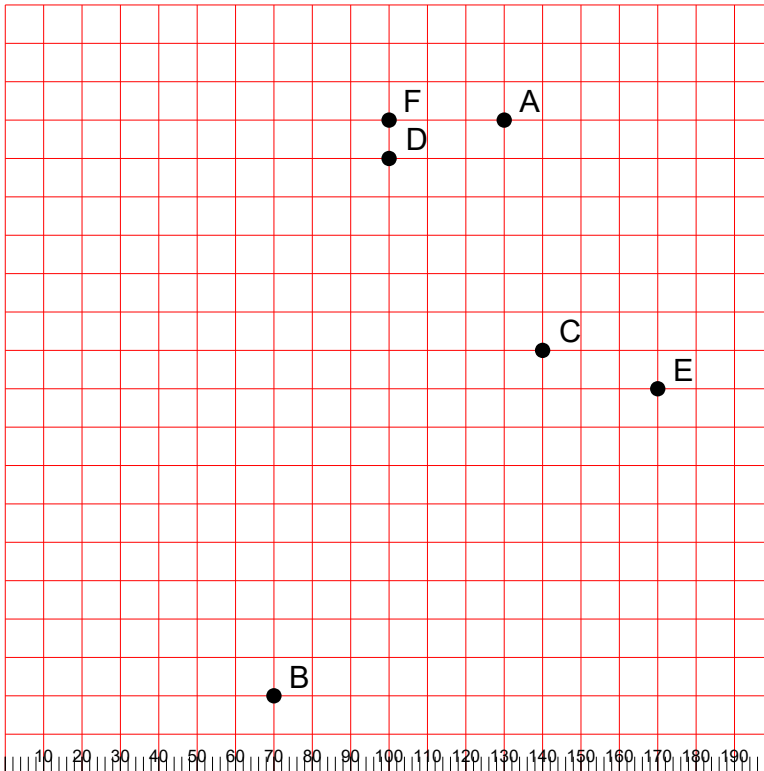
AB	=	110
AC	=	153
AD	=	54
AE	=	81
AF	=	63
BC	=	57
BD	=	61
BE	=	106
BF	=	103
CD	=	112
CE	=	117
CF	=	158
DE	=	91
DF	=	50
EF	=	132

15.



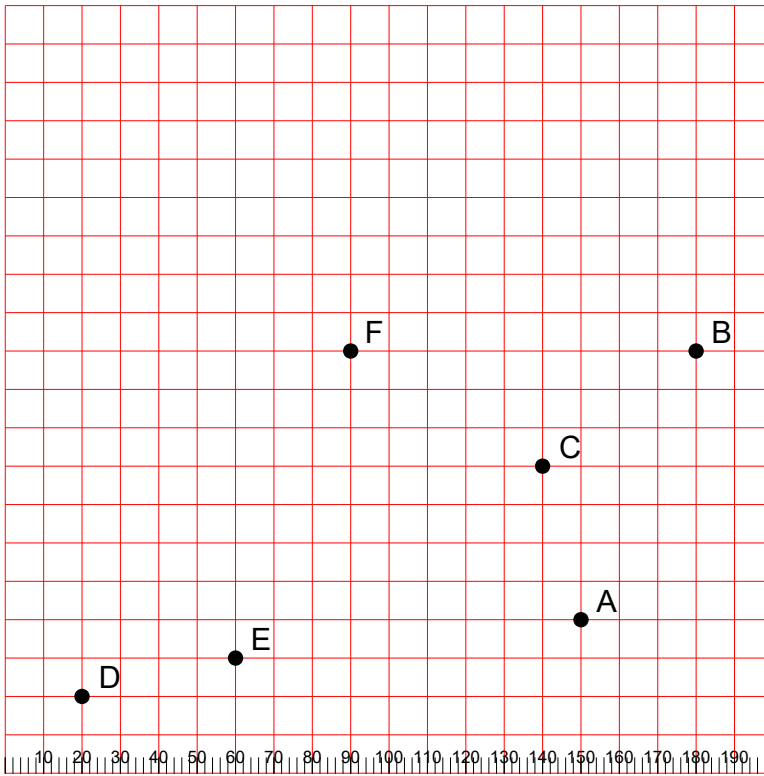
AB	=	143
AC	=	73
AD	=	57
AE	=	81
AF	=	32
BC	=	72
BD	=	92
BE	=	63
BF	=	124
CD	=	36
CE	=	20
CF	=	61
DE	=	30
DF	=	32
EF	=	61

16.



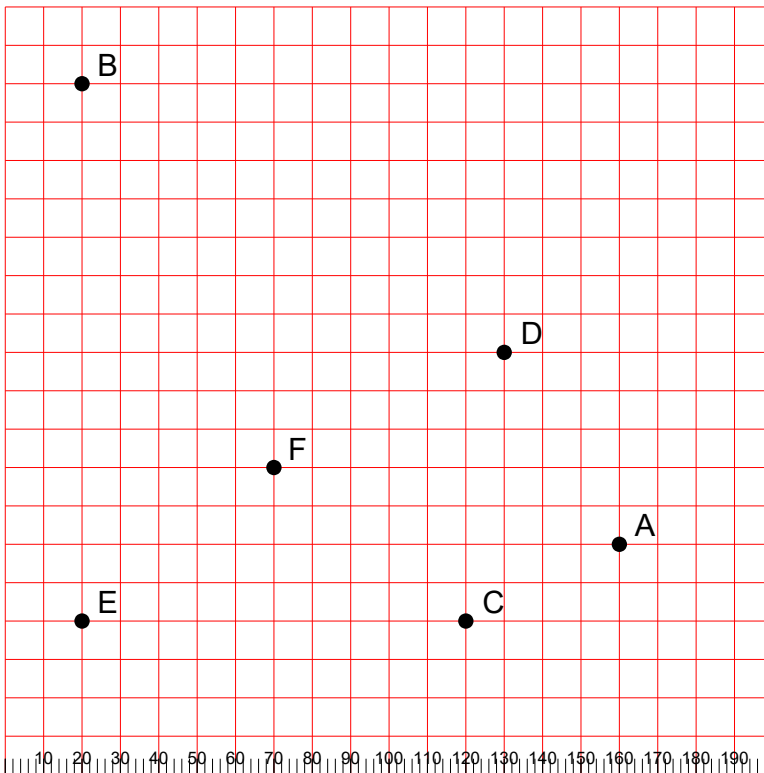
AB	=	162
AC	=	61
AD	=	32
AE	=	81
AF	=	30
BC	=	114
BD	=	143
BE	=	128
BF	=	153
CD	=	64
CE	=	32
CF	=	72
DE	=	92
DF	=	10
EF	=	99

17.



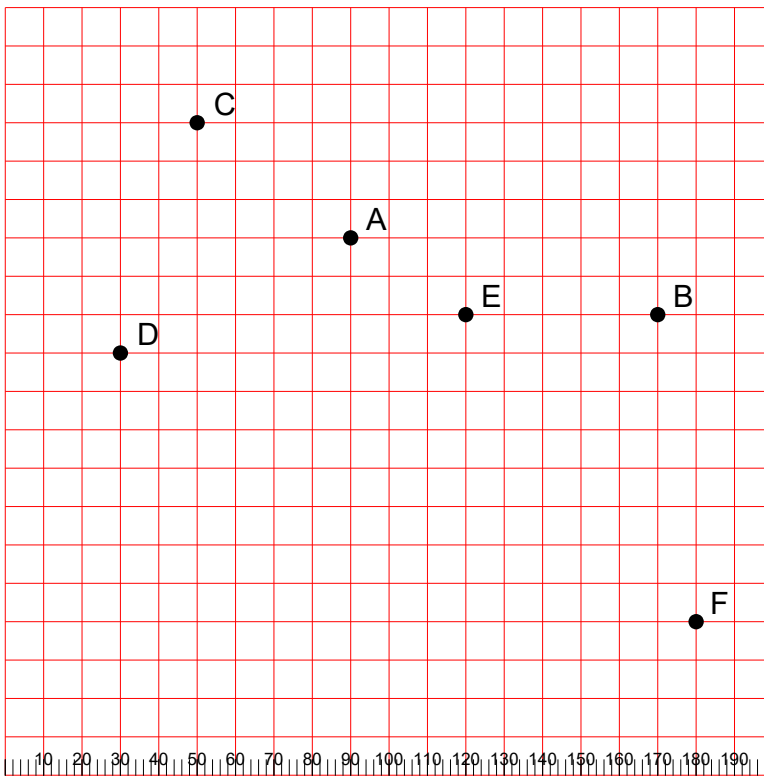
AB	=	76
AC	=	41
AD	=	132
AE	=	91
AF	=	92
BC	=	50
BD	=	184
BE	=	144
BF	=	90
CD	=	134
CE	=	94
CF	=	58
DE	=	41
DF	=	114
EF	=	85

18.



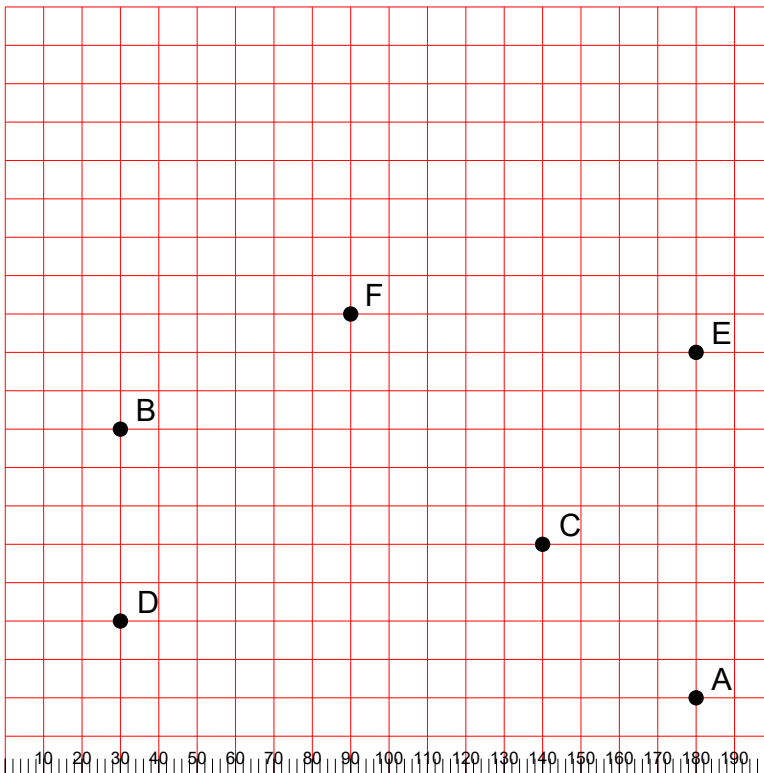
AB	=	184
AC	=	45
AD	=	58
AE	=	141
AF	=	92
BC	=	172
BD	=	130
BE	=	140
BF	=	112
CD	=	71
CE	=	100
CF	=	64
DE	=	130
DF	=	67
EF	=	64

19.



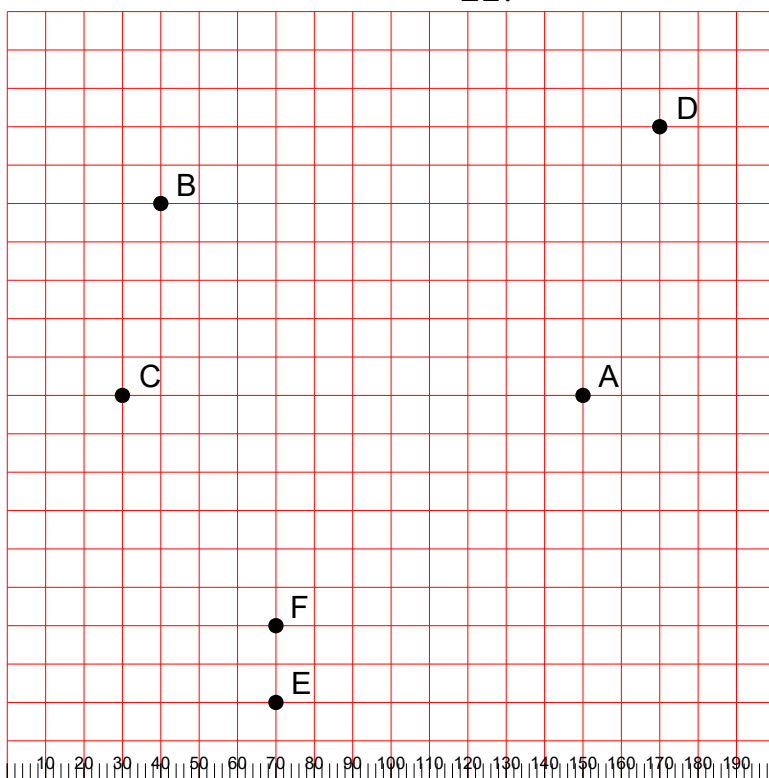
AB	=	82
AC	=	50
AD	=	67
AE	=	36
AF	=	135
BC	=	130
BD	=	140
BE	=	50
BF	=	81
CD	=	63
CE	=	86
CF	=	184
DE	=	91
DF	=	166
EF	=	100

20.



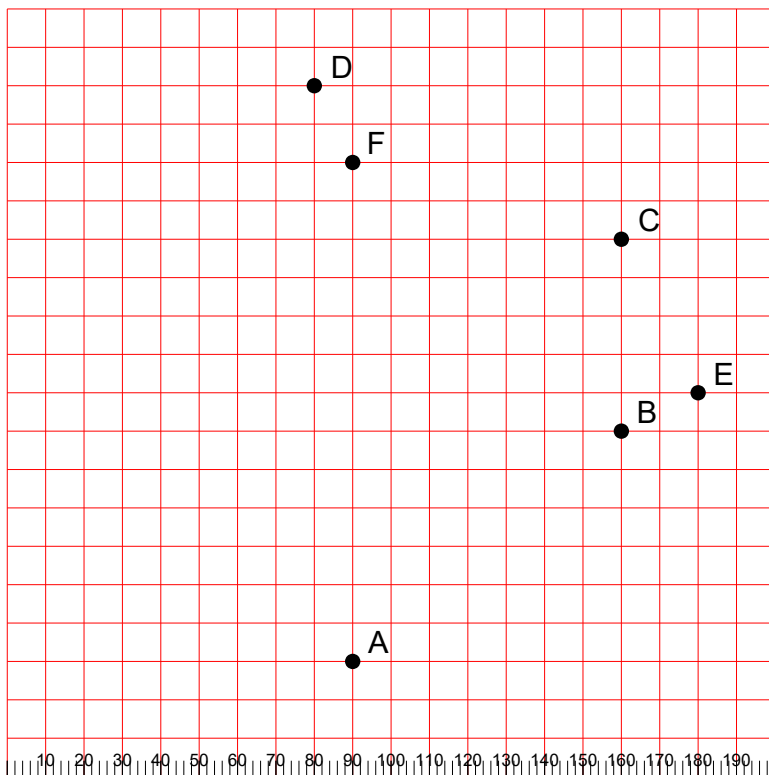
AB	=	166
AC	=	57
AD	=	151
AE	=	90
AF	=	135
BC	=	114
BD	=	50
BE	=	151
BF	=	67
CD	=	112
CE	=	64
CF	=	78
DE	=	166
DF	=	100
EF	=	91

21.



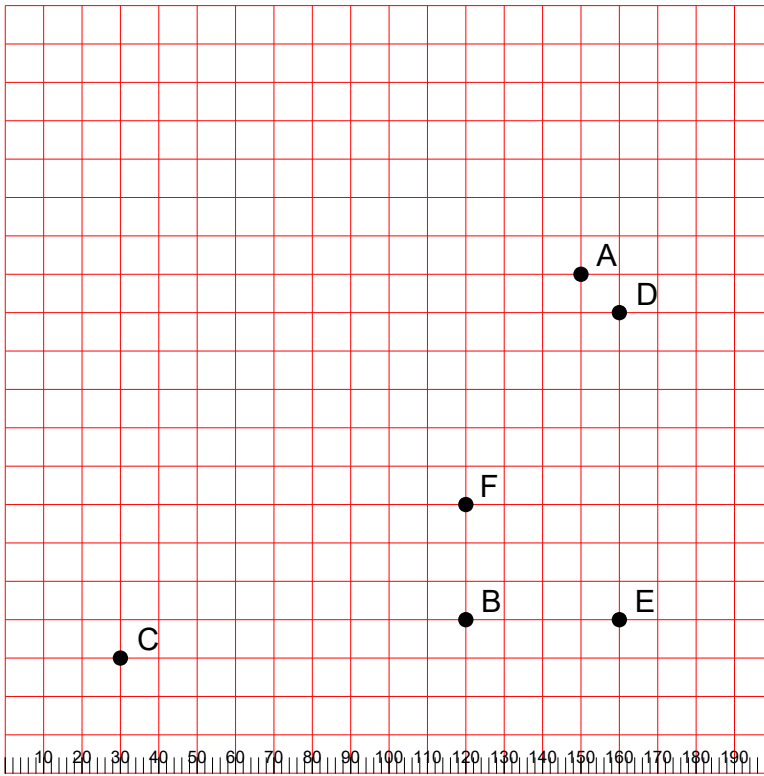
AB	=	121
AC	=	120
AD	=	73
AE	=	113
AF	=	100
BC	=	51
BD	=	132
BE	=	133
BF	=	114
CD	=	157
CE	=	89
CF	=	72
DE	=	180
DF	=	164
EF	=	20

22.



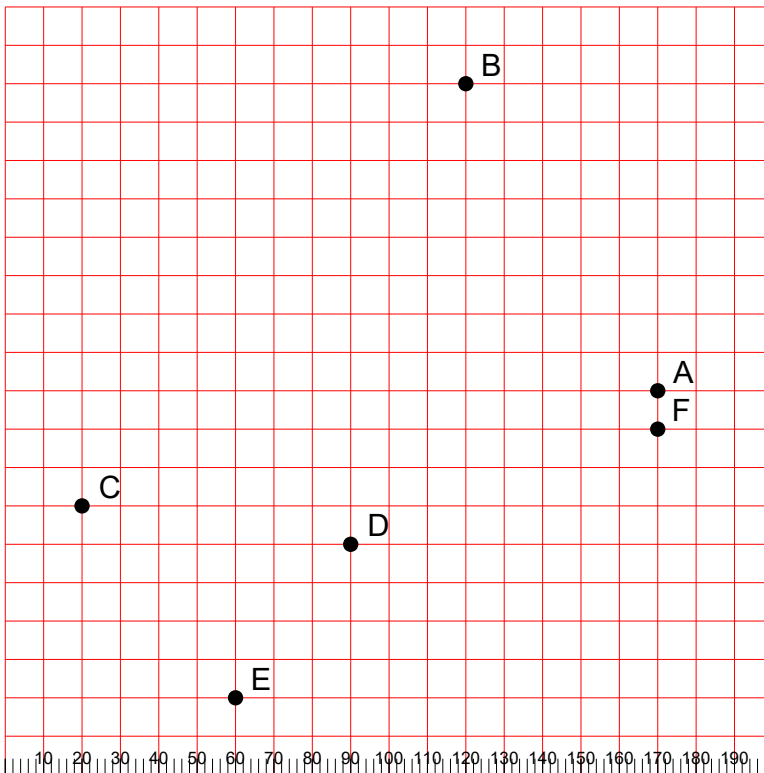
AB	=	92
AC	=	130
AD	=	150
AE	=	114
AF	=	130
BC	=	50
BD	=	120
BE	=	22
BF	=	99
CD	=	89
CE	=	45
CF	=	73
DE	=	128
DF	=	22
EF	=	108

23.



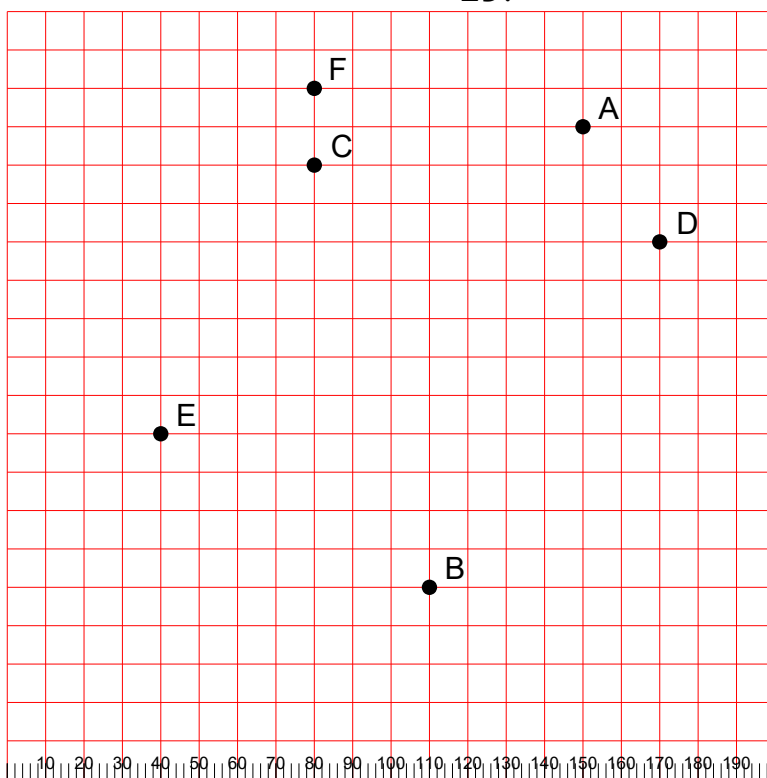
AB	=	95
AC	=	156
AD	=	14
AE	=	91
AF	=	67
BC	=	91
BD	=	89
BE	=	40
BF	=	30
CD	=	158
CE	=	130
CF	=	98
DE	=	80
DF	=	64
EF	=	50

24.



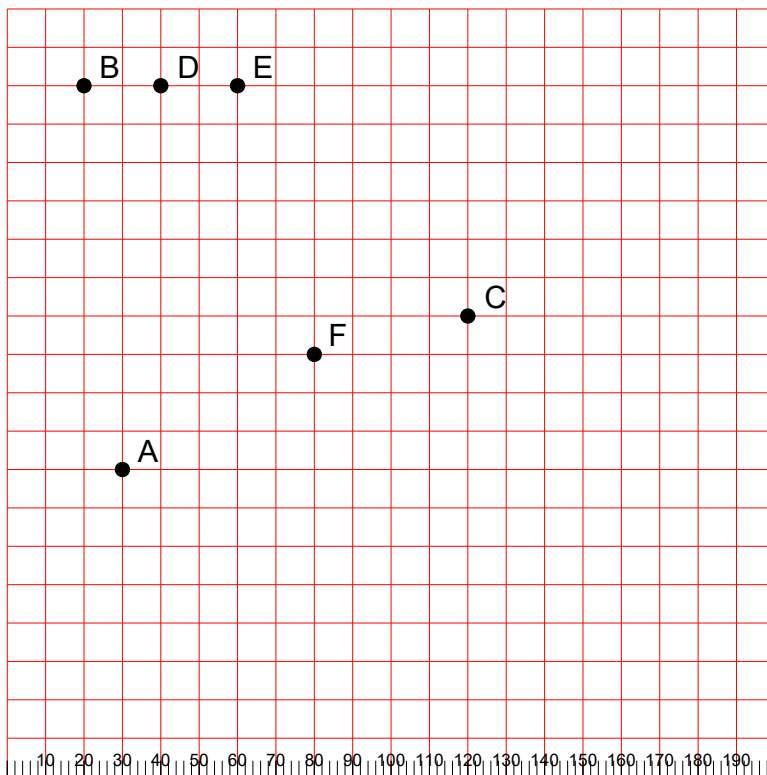
AB	=	94
AC	=	153
AD	=	89
AE	=	136
AF	=	10
BC	=	149
BD	=	124
BE	=	171
BF	=	103
CD	=	71
CE	=	64
CF	=	151
DE	=	50
DF	=	85
EF	=	130

25.



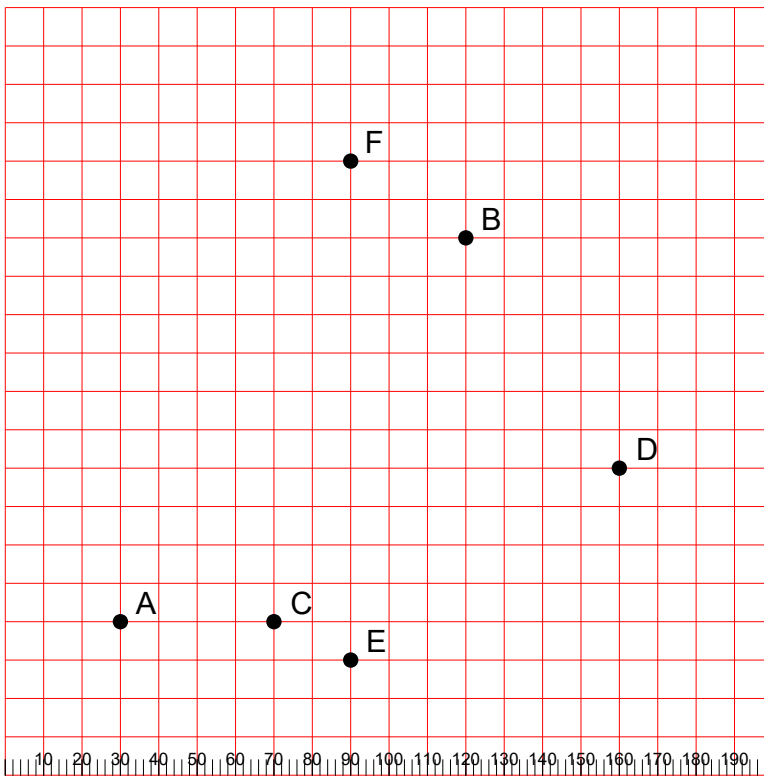
AB	=	126
AC	=	71
AD	=	36
AE	=	136
AF	=	71
BC	=	114
BD	=	108
BE	=	81
BF	=	133
CD	=	92
CE	=	81
CF	=	20
DE	=	139
DF	=	98
EF	=	98

26.



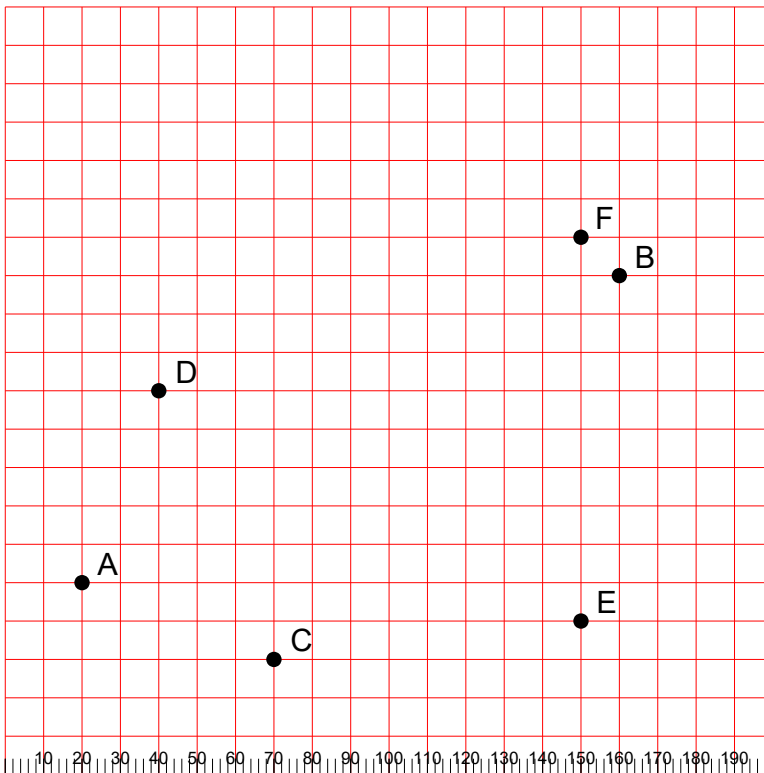
AB	=	100
AC	=	98
AD	=	100
AE	=	104
AF	=	58
BC	=	117
BD	=	20
BE	=	40
BF	=	92
CD	=	100
CE	=	85
CF	=	41
DE	=	20
DF	=	81
EF	=	73

27.



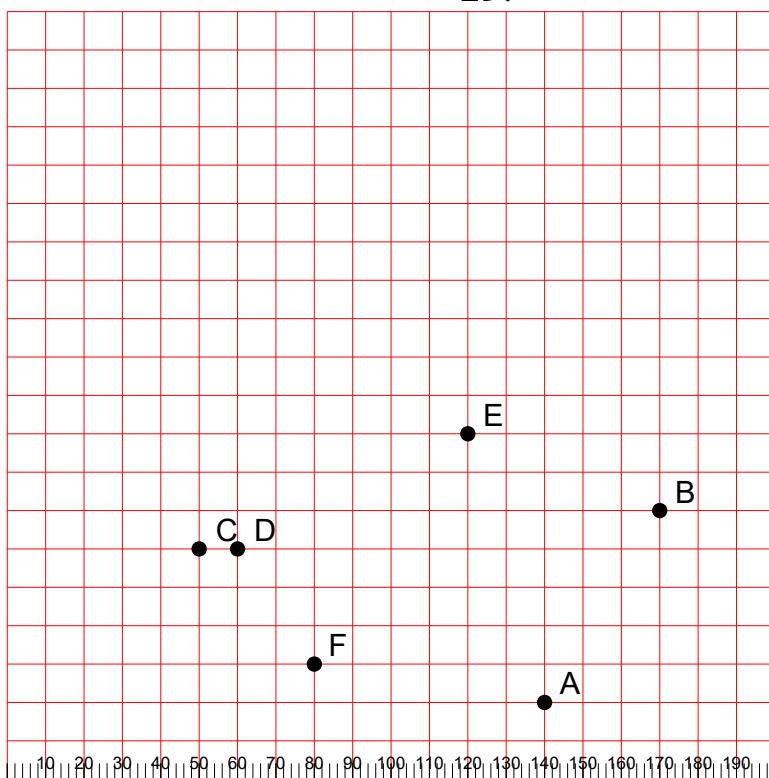
AB	=	135
AC	=	40
AD	=	136
AE	=	61
AF	=	134
BC	=	112
BD	=	72
BE	=	114
BF	=	36
CD	=	98
CE	=	22
CF	=	122
DE	=	86
DF	=	106
EF	=	130

28.



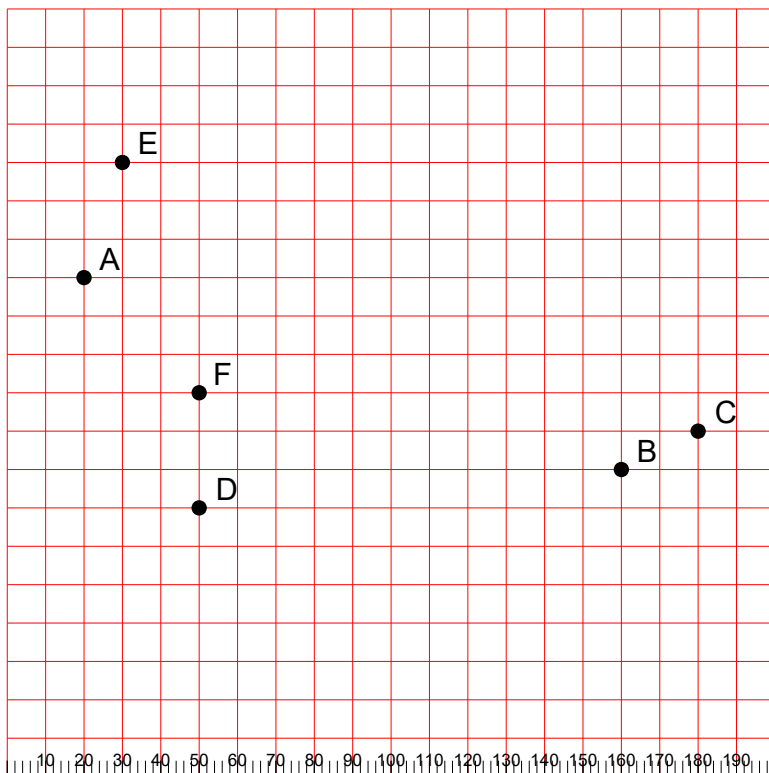
AB	=	161
AC	=	54
AD	=	54
AE	=	130
AF	=	158
BC	=	135
BD	=	124
BE	=	91
BF	=	14
CD	=	76
CE	=	81
CF	=	136
DE	=	125
DF	=	117
EF	=	100

29.



$ AB $	= 58
$ AC $	= 98
$ AD $	= 89
$ AE $	= 73
$ AF $	= 61
$ BC $	= 120
$ BD $	= 110
$ BE $	= 54
$ BF $	= 98
$ CD $	= 10
$ CE $	= 76
$ CF $	= 42
$ DE $	= 67
$ DF $	= 36
$ EF $	= 72

30.



$ AB $	= 149
$ AC $	= 165
$ AD $	= 67
$ AE $	= 32
$ AF $	= 42
$ BC $	= 22
$ BD $	= 110
$ BE $	= 153
$ BF $	= 112
$ CD $	= 132
$ CE $	= 166
$ CF $	= 130
$ DE $	= 92
$ DF $	= 30
$ EF $	= 63